

Multi Tasking Non Technical Staff Havaldar CBIC and CBN Examination 2021

Roll Number	
Candidate Name	
Venue Name	
Exam Date	06/07/2022
Exam Time	9:00 AM - 10:30 AM
Subject	MTS Non technical and Havaldar Examination 2021

Section : **General English**

Q.1 Select the option that corrects the misspelt words in the given sentence.

I can't pitcure him figting or picking on anyone.

- Ans 1. I can't picture him fighting or picking on anyone.
 2. I can't pitcure him fiting or piking on anyone.
 3. I can't pitcure him fighting or pekking on anyone.
 4. I can't pictre him fighting or pickning on anyone.

Question ID : 26433051102

Status : **Answered**

Chosen Option : 1

Q.2 Select the most appropriate option to fill in the blank.

The boys were tired, but not too tired to examine the little hut _____.

- Ans 1. weirdly
 2. weakly
 3. thoroughly
 4. sluggishly

Question ID : 26433051389

Status : **Answered**

Chosen Option : 3

Q.3 Select the most appropriate option to fill in the blank.

It is better to be prompt and organized than to be_____.

- Ans 1. provident
 2. meaningless
 3. efficient
 4. reckless

Question ID : 26433050792

Status : **Answered**

Chosen Option : 4

Q.4 Select the option that will improve the underlined part of the sentence. In case no improvement is needed, select 'No improvement required'.

Why doesn't you try calling your family again?

- Ans
- 1. you don't tries
 - 2. doesn't you tried
 - 3. don't you try
 - 4. No improvement required

Question ID : 26433050780
Status : Answered
Chosen Option : 3

Q.5 Parts of the following sentence have been given as options. One of them may contain an error. Select the part that contains the error from the given options. If you don't find any error, mark 'No error' as your answer.

The telecom growth story is a important component of the broader story of India.

- Ans
- 1. No error
 - 2. The telecom growth story is
 - 3. the broader story of India.
 - 4. a important component of

Question ID : 26433051080
Status : Answered
Chosen Option : 3

Q.6 Select the most appropriate ANTONYM of the underlined word.

Their reverence reaches its zenith here at the birthplace of the country's founder.

- Ans
- 1. crest
 - 2. Nadir
 - 3. horizon
 - 4. pinnacle

Question ID : 26433051688
Status : Answered
Chosen Option : 2

Q.7 Select the option that will improve the underlined part of the given sentence. In case no improvement is needed, select 'No improvement required'.

His mouth left open as he realise the truth.

- Ans
- 1. fell open as he perceived
 - 2. felt opened as he perceive
 - 3. was felt opened as he realise
 - 4. No improvement required

Question ID : 26433051620
Status : Answered
Chosen Option : 1

Q.8 The following sentence has been divided into parts. One of them may contain an error. Select the part that contains the error from the given options. If you don't find any error, mark 'No error' as your answer.

Solar storms can / impact Earth-dwellers / in significantly ways.

- Ans
- 1. Solar storms can
 - 2. impact Earth-dwellers
 - 3. No error
 - 4. in significantly ways

Question ID : 26433050949
Status : Answered
Chosen Option : 4

Q.9 Select the option that will improve the underlined part of the given sentence. In case no improvement is needed, select 'No improvement required'.

I noticed some strawberries grown in which of the gardens.

- Ans
- 1. growing in which of
 - 2. grows upon one of
 - 3. No improvement required
 - 4. growing in one of

Question ID : 26433050588
Status : Answered
Chosen Option : 4

Q.10 Select the most appropriate synonym of the given word.

Random

- Ans
- 1. Definite
 - 2. Continuous
 - 3. Systematic
 - 4. Chance

Question ID : 26433050965
Status : Answered
Chosen Option : 4

Q.11 Select the option that can be used as a one-word substitute for the given group of words.

Deliberately and maliciously set something (buildings usually) on fire

- Ans
- 1. Agrarian
 - 2. Arson
 - 3. Ambush
 - 4. Apex

Question ID : 26433051379
Status : Answered
Chosen Option : 2

Q.12 Select the option that will improve the underlined part of the sentence. In case no improvement is needed, select 'No improvement required'.

He stood up from their chair to signal the end of the meeting.

- Ans
- 1. up from his
 - 2. upon of his
 - 3. No improvement required
 - 4. below in their

Question ID : 26433051066
Status : Answered
Chosen Option : 1

Q.13 Select the option that will improve the underlined part of the given sentence. In case no improvement is needed, select 'No improvement required'.

Shubham and I were watching football match in our bedroom.

- Ans
- 1. I were watched
 - 2. I was watching
 - 3. me is watching
 - 4. No improvement required

Question ID : 26433050961
Status : Answered
Chosen Option : 4

Q.14 Select the correctly spelt word.

- Ans
- 1. Influnce
 - 2. Influence
 - 3. Influnace
 - 4. Influnnce

Question ID : 26433050945
Status : Answered
Chosen Option : 2

Q.15 Select the most appropriate meaning of the given idiom.

Out for the count

- Ans
- 1. Very expensive
 - 2. Prepared for battle
 - 3. In a deep, insensible sleep
 - 4. Ready for scrutiny

Question ID : 26433051385
Status : Answered
Chosen Option : 4

Q.16 Select the option that will improve the underlined part of the given sentence. In case no improvement is needed, select 'No improvement required'.

Although the waters may have receded, the aftermath of one of the world's biggest natural disaster had only just begun.

- Ans 1. the aftermath of one of the world's biggest natural disasters
 2. No improvement required
 3. the aftermath of one of the worlds' biggest natural disasters has
 4. the aftermath of one of the worlds' biggest natural disaster

Question ID : 26433051595
Status : Answered
Chosen Option : 1

Q.17 Select the most appropriate synonym of the given word.

Modest

- Ans 1. Bold
 2. Humble
 3. Dismal
 4. Grave

Question ID : 26433051381
Status : Answered
Chosen Option : 2

Q.18 The following sentence has been split into four segments. Identify the segment that contains a grammatical error.

Most of the / freshwater lake in India / are in the / Himalayan region.

- Ans 1. Himalayan region
 2. Most of the
 3. are in the
 4. freshwater lake in India

Question ID : 26433051470
Status : Answered
Chosen Option : 4

Q.19 Select the most appropriate ANTONYM of the given word.

Refute

- Ans 1. Endorse
 2. Acknowledge
 3. Deny
 4. Dispute

Question ID : 26433050937
Status : Answered
Chosen Option : 2

Q.20 Select the most appropriate meaning of the given idiom.

Draw the line

- Ans**
- 1. To accept someone's idea
 - 2. To give a second chance
 - 3. To move on from a past relationship
 - 4. To set a limit on something

Question ID : 26433050993

Status : Answered

Chosen Option : 4

Comprehension:

In the following passage, some words have been deleted. Read the passage carefully and select the most appropriate option to fill in each blank.

The Government is taking seriously the (1)_____of road safety and is committed to reducing the number of people killed in accidents. Forums are being conducted (2)_____to bring law-makers, law enforcement officers and road users together to discuss ways to (3)_____the rise in road accidents. Everyone agrees that more needs to be done on road safety in its determination to (4)_____the rate of road accidents in the country. The Government, with the cooperation of relevant agencies, is making serious (5)_____to instil proper road culture in children, young adults and the public in general.

SubQuestion No : 21

Q.21 Select the most appropriate option to fill in blank number 1.

- Ans**
- 1. release
 - 2. residue
 - 3. issue
 - 4. site

Question ID : 26433051374

Status : Answered

Chosen Option : 3

Comprehension:

In the following passage, some words have been deleted. Read the passage carefully and select the most appropriate option to fill in each blank.

The Government is taking seriously the (1)_____of road safety and is committed to reducing the number of people killed in accidents. Forums are being conducted (2)_____to bring law-makers, law enforcement officers and road users together to discuss ways to (3)_____the rise in road accidents. Everyone agrees that more needs to be done on road safety in its determination to (4)_____the rate of road accidents in the country. The Government, with the cooperation of relevant agencies, is making serious (5)_____to instil proper road culture in children, young adults and the public in general.

SubQuestion No : 22

Q.22 Select the most appropriate option to fill in blank number 2.

- Ans**
- 1. regularly
 - 2. habitually
 - 3. terminally
 - 4. rarely

Question ID : 26433051375

Status : Answered

Chosen Option : 1

Comprehension:

In the following passage, some words have been deleted. Read the passage carefully and select the most appropriate option to fill in each blank.

The Government is taking seriously the (1)_____of road safety and is committed to reducing the number of people killed in accidents. Forums are being conducted (2)_____to bring law-makers, law enforcement officers and road users together to discuss ways to (3)_____the rise in road accidents. Everyone agrees that more needs to be done on road safety in its determination to (4)_____the rate of road accidents in the country. The Government, with the cooperation of relevant agencies, is making serious (5)_____to instil proper road culture in children, young adults and the public in general.

SubQuestion No : 23

Q.23 Select the most appropriate option to fill in blank number 3.

- Ans**
- 1. confess
 - 2. tackle
 - 3. conduct
 - 4. deal

Question ID : 26433051376

Status : Answered

Chosen Option : 2

Comprehension:

In the following passage, some words have been deleted. Read the passage carefully and select the most appropriate option to fill in each blank.

The Government is taking seriously the (1)_____of road safety and is committed to reducing the number of people killed in accidents. Forums are being conducted (2)_____to bring law-makers, law enforcement officers and road users together to discuss ways to (3)_____the rise in road accidents. Everyone agrees that more needs to be done on road safety in its determination to (4)_____the rate of road accidents in the country. The Government, with the cooperation of relevant agencies, is making serious (5)_____to instil proper road culture in children, young adults and the public in general.

SubQuestion No : 24

Q.24 Select the most appropriate option to fill in blank number 4.

- Ans**
- 1. curb
 - 2. lure
 - 3. incite
 - 4. promote

Question ID : 26433051377

Status : Answered

Chosen Option : 1

Comprehension:

In the following passage, some words have been deleted. Read the passage carefully and select the most appropriate option to fill in each blank.

The Government is taking seriously the (1)_____of road safety and is committed to reducing the number of people killed in accidents. Forums are being conducted (2)_____to bring law-makers, law enforcement officers and road users together to discuss ways to (3)_____the rise in road accidents. Everyone agrees that more needs to be done on road safety in its determination to (4)_____the rate of road accidents in the country. The Government, with the cooperation of relevant agencies, is making serious (5)_____to instil proper road culture in children, young adults and the public in general.

SubQuestion No : 25

Q.25 Select the most appropriate option to fill in blank number 5.

- Ans 1. acknowledgements
 2. powers
 3. efforts
 4. struggles

Question ID : 26433051378
Status : Answered
Chosen Option : 3

Section : General Intelligence and Reasoning

Q.1 Select the number from the given options that can replace the question mark (?) in the following series.

205, 222, 241, 264, 293, ?

- Ans 1. 346
 2. 324
 3. 328
 4. 334

Question ID : 26433048844
Status : Answered
Chosen Option : 2

Q.2 In a certain code language, 'TYR' is coded as '65', and 'GAP' is coded as '26'. How will 'MOJ' be coded in that language?

- Ans 1. 40
 2. 41
 3. 38
 4. 39

Question ID : 26433048945
Status : Answered
Chosen Option : 1

Q.3 Select the option that is related to the sixth word in the same way as the first word is related to the second word and the third word is related to the fourth word.

Speech : Dumb :: Sight : Blind :: ? : Deaf

- Ans 1. Sound
 2. Vibrations
 3. Voice
 4. Language

Question ID : 26433048094
Status : Answered
Chosen Option : 1

Q.4 In a certain code language, 'Floors white marble' is written as 'tp aj pr', 'Tyre are hard white' is written as 'pr qs tr ak' and 'Marble are shiny' is written as 'tp tr 6'. What is the code for 'Shiny floors' in that code language?

- Ans 1. tr aj
 2. 6 ak
 3. aj 6
 4. 6 pr

Question ID : 26433048798
Status : Answered
Chosen Option : 3

Q.5 Which of the mathematical signs should be interchanged in the given equation to make it mathematically correct?

$$31 \div 14 \times 9 + 3 - 7 = 66$$

- Ans 1. \div and +
 2. \div and \times
 3. - and \times
 4. - and +

Question ID : 26433048336
Status : Answered
Chosen Option : 1

Q.6 Select the option in which the two numbers are related in the same way as are the numbers in the give number pair.

31 : 48

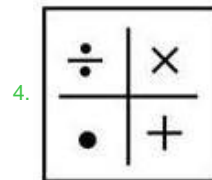
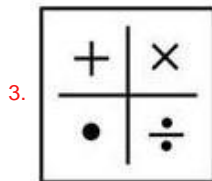
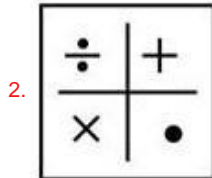
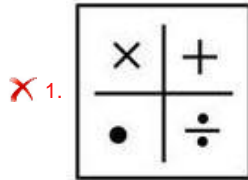
- Ans 1. 29 : 44
 2. 43 : 62
 3. 53 : 74
 4. 37 : 54

Question ID : 26433048742
Status : Answered
Chosen Option : 4

Q.7 Select the figure from among the given options that can replace the question mark (?) in the following series.

$\frac{+}{\times} \cdot \div$	$\frac{\times}{\div} + \cdot$	$\frac{\cdot}{+} \div \times$	$\frac{\div}{\cdot} \times +$?
-------------------------------	-------------------------------	-------------------------------	-------------------------------	---

Ans



Question ID : 26433048484

Status : Answered

Chosen Option : 4

Q.8 Read the given statements and conclusions carefully. Assuming that the information given in the statements is true, even if it appears to be at variance with commonly known facts, decide which of the given conclusions logically follow(s) from the statements.

Statements:

Some tablets are laptops.

Some laptops are computers.

Conclusions:

I. Some tablets are computers.

II. Some laptops are not tablets.

Ans 1. Only conclusion I follows.

✗ 2. Both conclusions I and II follow.

✓ 3. Neither conclusion I nor II follows.

✗ 4. Only conclusion II follows.

Question ID : 26433048305

Status : Answered

Chosen Option : 3

Q.9 Select the option that is related to the fifth number in the same way as the second number is related to the first number and the fourth number is related to the third number.

16: 38:: 26: 58:: 37: ?

- Ans
- 1. 78
 - 2. 76
 - 3. 74
 - 4. 80

Question ID : 26433048308
 Status : Answered
 Chosen Option : 4

Q.10 The sequence of folding a piece of paper and the manner in which the folded paper has been cut is shown in the following figures. How would this paper look when unfolded?



Ans

- 1.
- 2.
- 3.
- 4.

Question ID : 26433048637
 Status : Answered
 Chosen Option : 1

Q.11 Select the option that is related to the fifth letter-cluster in the same way as the second letter-cluster is related to the first letter-cluster and the fourth letter-cluster is related to the third letter-cluster.

GOOD : HSXT :: BEST : CIBJ :: COOL : ?

- Ans
- 1. DSSB
 - 2. DSXZ
 - 3. DSZB
 - 4. DSXB

Question ID : 26433048295
 Status : Answered
 Chosen Option : 4

Q.12 Select the option in which the pair of letter-clusters share the same relationship as that shared by the given pair of letter-clusters.

MOB : KMZ :: ?

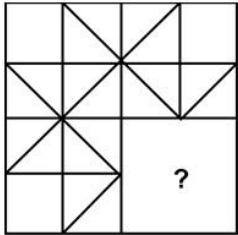
- Ans 1. AJK : YHN
 2. LOP : JMN
 3. BND : DLB
 4. STB : PRZ

Question ID : 26433048949

Status : Answered

Chosen Option : 2

Q.13 Select the figure from the options that can replace the question mark (?) and complete the pattern.



Ans

- 1.
- 2.
- 3.
- 4.

Question ID : 26433048067

Status : Answered

Chosen Option : 1

Q.14 Select the option figure in which the given figure is embedded.



Ans

✗ 1.



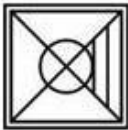
✓ 2.



3.



4.



Question ID : 26433048760

Status : Answered

Chosen Option : 2

Q.15 In a certain code language, 'CYLINDER' is written as 'CYLJNDFR', 'CERTAIN' is written as 'CFRTBJN', and 'PURPOSE' is written as 'PVRPPSF'. How will 'QUEUEING' be written in that language?

Ans

1. QFVJVJNG

2. QVFVEJNG

3. RVFVEJNG

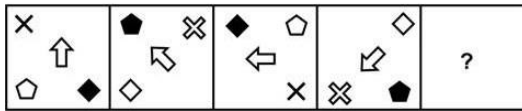
4. QFVJVJNG

Question ID : 26433048097

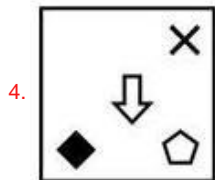
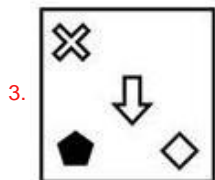
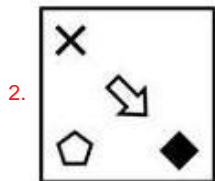
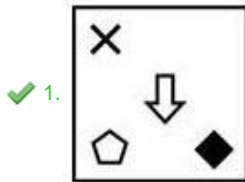
Status : Answered

Chosen Option : 4

Q.16 Select the figure from among the given options that can replace the question mark (?) in the following series.



Ans



Question ID : 26433048312

Status : Answered

Chosen Option : 1

Q.17 Read the given statements and conclusions carefully. Assuming that the information given in the statements is true, even if it appears to be at variance with commonly known facts, decide which of the given conclusions logically follow(s) from the statements.

Statements:

- I. Some blue are red.
- II. Some green are red.

Conclusions:

- I. No blue is green.
- II. No red is green.

- Ans
- 1. Only conclusion I follows
 - ✗ 2. Both conclusions I and II follow
 - ✗ 3. Only conclusion II follows
 - ✓ 4. Neither conclusion I nor II follows

Question ID : 26433048753

Status : Answered

Chosen Option : 4

Q.18 In a certain code language, '587' is written as 'see good pictures', '539' is written as 'good and beautiful', and '967' is written as 'pictures are beautiful'. What is the code for the word 'see' in that language?

- Ans 1. 8
 2. 7
 3. 6
 4. 5

Question ID : 26433048074
Status : Answered
Chosen Option : 1

Q.19 Select the option that can replace the question mark (?) in the following series.

B, D, G, L, S, ?

- Ans 1. E
 2. F
 3. D
 4. C

Question ID : 26433048318
Status : Answered
Chosen Option : 3

Q.20 Seven boys J, M, N, K, P, L and O sit in a row facing the South (but not necessarily in the same order). K sits fifth to the left of J. K does not sit at any of ends. L sits exactly in the middle of the row. L sits third to the right of M. Only two boys sit between O and P. O is not the immediate neighbour of L.

Three of the following are similar by a certain logic and form a group. Which of the following does NOT belong to that group?

- Ans 1. NJ
 2. PN
 3. LO
 4. KM

Question ID : 26433048856
Status : Answered
Chosen Option : 4

Q.21 After interchanging the two numbers 3 and 6, what will be the value of the given expression?

$$12 \times 3 \div 6 + 8 - 2$$

- Ans 1. 15
 2. 25
 3. 30
 4. 20

Question ID : 26433048839
Status : Answered
Chosen Option : 3

Q.22 Select the option that is related to the fifth number in the same way as the second number is related to the first number and the fourth number is related to the third number.

23 : 72 :: 38 : 117 :: 46 : ?

Ans 1. 138

2. 156

3. 141

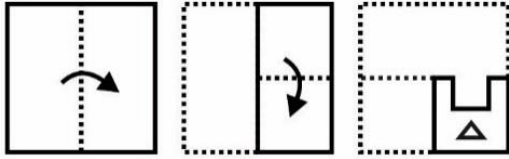
4. 122

Question ID : 26433048478

Status : Answered


Chosen Option : 3

Q.23 The sequence of folding a piece of paper and the manner in which the folded paper has been cut is shown in the following figures. How would this paper look when unfolded?

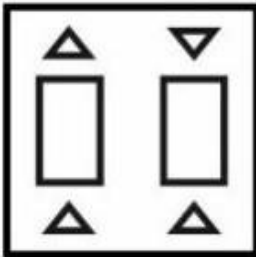


Ans

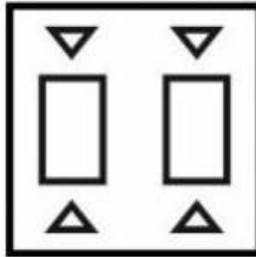
✗ 1.



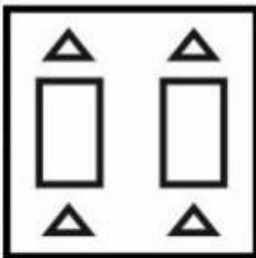
✗ 2.



✓ 3.



✗ 4.



Question ID : 26433048887

Status : Answered

Chosen Option : 3

Q.24 The weight of seven boys B1, B2, B3, B4, B5, B6 and B7 are compared. The weight of B5 is less than only one boy and more than that of B6. The weight of B4 is neither more nor less than B6 but more than B1, B7, B3. Who weighs the most?

- Ans
- 1. B5
 - 2. B2
 - 3. B6
 - 4. B1

Question ID : 26433048857

Status : Answered

Chosen Option : 2

Q.25 Seven sisters, Anita, Babita, Sunita, Dixita, Rita, Lalita and Geeta are standing in a row facing north. Lalita is standing to the immediate right of Rita who stands fourth to the right of Geeta. Only Sunita stands exactly between Babita and Dixita. Dixita stands at the middle position. Who stands at the rightmost position?

- Ans
- 1. Lalita
 - 2. Anita
 - 3. Geeta
 - 4. Sunita

Question ID : 26433048472

Status : Answered

Chosen Option : 2

Section : Numerical Aptitude

Q.1 If $A = \frac{1}{2} + \frac{1}{3} \times \frac{1}{4} \div \frac{1}{5} - \frac{1}{6}$ and $B = \frac{1}{2} \div \frac{1}{3} \times \frac{1}{4} + \frac{1}{5}$, then what is the value of $A - B$?

- Ans
- 1. $\frac{17}{20}$
 - 2. $\frac{9}{20}$
 - 3. $\frac{7}{40}$
 - 4. $\frac{1}{5}$

Question ID : 26433049814

Status : Answered

Chosen Option : 3

Q.2 The perimeter of a square is equal to the perimeter of a rectangle, and the latter has a width of 12 cm. The area of the square is 400 cm². Find the area of the rectangle.

- Ans**
1. 412 cm²
 2. 394 cm²
 3. 324 cm²
 - ✓ 4. 336 cm²

Question ID : 26433049517
Status : Answered
Chosen Option : 4

Q.3 In a competitive exam, the minimum qualifying percentages for Category A and Category B jobs are 25% and 45%, respectively. A candidate scored 83 marks and failed to get a Category B job by 25 marks. What is the minimum qualifying marks to secure a Category A job?

- Ans**
- 1.
 - 2.
 - 3.
 - 4.

Question ID : 26433050074
Status : Answered
Chosen Option : 2

Q.4 If $\frac{32 \div 16 - 5 \times 2}{11 \div 22 \times 8 - 5 \times 2} = \frac{1}{P}$, then what is the value of P?

- Ans**
1. $\frac{4}{3}$
 2. $\frac{5}{4}$
 3. $\frac{3}{4}$
 4. $\frac{4}{5}$

Question ID : 26433049663
Status : Answered
Chosen Option : 3

Q.5 If the total surface area of a sphere of radius r cm is equal to the total surface area of a cube of side s cm, which of the following is true?

- Ans**
1. $r > s$
 2. $r \geq s$
 3. $r = s$
 - ✓ 4.

Question ID : 26433050341
Status : Answered
Chosen Option : 4

Q.6 The average salary of 12 employees in a company was recorded to be ₹20,000. If the salary of the manager is also included, then the average salary increases by ₹2,000. Find the salary of the manager.

- Ans**
1. ₹36,000
 - ✓ 2. ₹46,000
 3. ₹28,000
 4. ₹42,000

Question ID : 26433049497
Status : Answered
Chosen Option : 2

Q.7 Umesh earns a simple interest of ₹1,600 on a certain sum in two years at the rate of 4% per annum. How much more interest would he have earned if he had invested the same sum at 4% interest per annum, compounded annually?

- Ans**
- 1.
 - 2.
 - 3.
 - 4.

Question ID : 26433050082
Status : Answered
Chosen Option : 3

Q.8 The average of a set of 20 numbers is P. If one of the numbers from the set is replaced with 58, then the average becomes $(P - 2)$. What is the value of the number that is replaced?

- Ans**
- 1.
 - 2.
 - 3.
 - 4.

Question ID : 26433049679
Status : Answered
Chosen Option : 1

Q.9 The diameter of a circle is 112 cm. What is the circumference of this circle? [Use $\pi = \frac{22}{7}$]

- Ans**
- 1.
 - 2.
 - 3.
 - ✓ 4. 352 cm

Question ID : 26433049659
Status : Answered
Chosen Option : 4

Q.10 If the selling price of a shirt is reduced from ₹440 to ₹410, the loss increases by 4%. What is the cost price of the shirt?

- Ans
- 1. ₹650
 - ✓ 2. ₹750
 - ✗ 3. ₹450
 - ✗ 4. ₹500

Question ID : 26433050076
Status : Answered
Chosen Option : 2

Q.11 The marked price of a table is 130% of its cost price. A discount of 20% is given on the sale of the table. What will be the profit percentage?

- Ans
- 1.
 - ✗ 2.
 - ✗ 3.
 - 4.

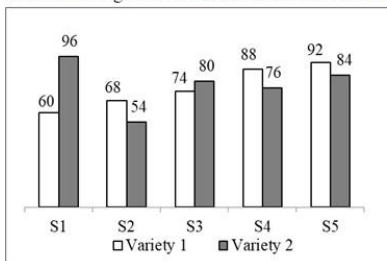
Question ID : 26433049674
Status : Answered
Chosen Option : 4

Q.12 A fan is sold for ₹1,560 at a profit of 30%. If its selling price is ₹960, then what will be the loss percentage?

- Ans
- 1.
 - 2.
 - ✗ 3.
 - ✗ 4.

Question ID : 26433049648
Status : Answered
Chosen Option : 2

Q.13 The bar chart given below shows the number of tea packets of 2 varieties sold by 5 shops during a particular week.



What is the average number of tea packets sold per shop, both the varieties take together?

- Ans
- ✓ 1. 154.4
 - ✗ 2. 152.8
 - ✗ 3. 157.6
 - ✗ 4. 149.2

Question ID : 26433049816
Status : Answered
Chosen Option : 1

Q.14 S is 20% more than T. T is 10% less than U. What is the ratio of S to U?

- Ans 1. 27 : 25
 2. 23 : 19
 3. 25 : 21
 4. 29 : 24

Question ID : 26433049700
Status : Answered
Chosen Option : 1

Q.15 P_1 alone can do $\frac{2}{3}$ of the work in 8 days. P_2 alone can do $\frac{7}{12}$ of the work in 14 days. P_3 alone can do $\frac{8}{15}$ of the work in 16 days. In how many days can they complete the work, if all three work together?

- Ans 1. $\frac{60}{19}$ days
 2. $\frac{120}{19}$ days
 3. $\frac{100}{17}$ days
 4. $\frac{80}{17}$ days

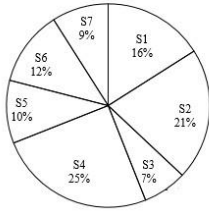
Question ID : 26433049643
Status : Answered
Chosen Option : 2

Q.16 The LCM of two positive integers is twice the larger number and the HCF of the two numbers is 3. The smaller number is:

- Ans 1.
 2.
 3.
 4.

Question ID : 26433050070
Status : Answered
Chosen Option : 1

Q.17 The following pie chart shows the number of bags sold by 7 different shops during a month as percentages of the total number of bags sold during this month by these 7 shops taken together.



If the total number of bags sold during the given month by these 7 shops taken together was 1400, then what was the total number of bags sold by S3 and S7 taken together?

- Ans
- 1. 240
 - 2. 196
 - 3.
 - 4.

Question ID : 26433049667
Status : Answered
Chosen Option : 3

Q.18 The average weight of A, B, and C is 52 kg. If the average weight of B and C is 44 kg and that of C and A is 46 kg, then what will be the weight of C?

- Ans
- 1. 24 kg
 - 2. 38 kg
 - 3. 36 kg
 - 4. 68 kg

Question ID : 26433050321
Status : Answered
Chosen Option : 1

Q.19 The speed of a boat in still water is 10 km/h. The speed of the stream is 2 km/h. What is the total distance that the boat will travel if it is rowed for 4 hours upstream and 3 hours downstream?

- Ans
- 1.
 - 2.
 - 3.
 - 4.

Question ID : 26433049795
Status : Answered
Chosen Option : 4

Q.20 The table below shows the number of overs bowled and the number of wickets taken by five bowlers in a match.

Bowler	Overs	Wickets
Jadeja	8	3
Jaspreet	6	2
Bumrah	5	1
Pandya	4	3
Ashwin	6	1

If in each over every bowler bowled 6 balls, in that match which bowler had bowled the highest number of balls per wicket taken by him?

- Ans
- 1. Jadeja
 - 2. Bumrah
 - 3.
 - 4.

Question ID : 26433050187
Status : Answered
Chosen Option : 3

Q.21 What number must be subtracted from each of the numbers 55, 23, 43 and 19, so that the new values are in proportion?

- Ans
- 1.
 - 2.
 - 3.
 - 4.

Question ID : 26433049805
Status : Answered
Chosen Option : 3

Q.22 The price of diesel increases by 5% every year. If the current price of diesel is ₹80 per litre, then what will be the price of diesel per litre after 2 years?

- Ans
- 1.
 - 2.
 - 3.
 - 4.

Question ID : 26433049682
Status : Answered
Chosen Option : 4

Q.23 A person has some coins of ₹10, ₹5, and ₹2 denominations. The ratio of the products of the numbers of ₹10 and ₹5 coins, the numbers of ₹5 and ₹2 coins, and the numbers of ₹2 and ₹10 coins is 3 : 4 : 2 respectively. What could be the minimum amount of money this person has?

- Ans
- 1. ₹52
 - 2. ₹88
 - 3. ₹68
 - 4. ₹74

Question ID : 26433050180
Status : Answered
Chosen Option : 3

Q.24 A can do a piece of work alone in 30 days. B is 25% less efficient than A, while C is $33\frac{1}{3}\%$ more efficient than B. In how many days can A, B and C, working together, complete the work?

- Ans
- 1. $\frac{150}{11}$ days
 - 2. $\frac{120}{11}$ days
 - 3. $\frac{140}{11}$ days
 - 4. $\frac{130}{11}$ days

Question ID : 26433050044
Status : Answered
Chosen Option : 2

Q.25 A man can row downstream at a speed of 15 km/h and upstream at 11 km/h. Find his speed in still water and the speed of the current, respectively. [Give both your answers in km/h]

- Ans
- 1.
 - 2.
 - 3.
 - 4.

Question ID : 26433050184
Status : Answered
Chosen Option : 3

Section : General Awareness

Q.1 Alluri Sitaram Raju was a tribal freedom fighter from which state of India?

- Ans
- 1. Bihar
 - 2. Maharashtra
 - 3. Andhra Pradesh
 - 4. Gujarat

Question ID : 26433047058
Status : Answered
Chosen Option : 3

Q.2 Which country will host the FIFA World Cup 2022?

- Ans
- 1. China
 - 2. South Africa
 - 3. Qatar
 - 4. England

Question ID : 26433047490
Status : Answered
Chosen Option : 3

Q.3 भारत म" इनम" से िकस सं5था ढारा कर" सी नोट और िनग'त िकए एक 7पये के िस%े जाते ह*?

- Ans
- 1. इंपीरयल ब*क ऑफ इंडिया
 - 2. भारतीय औ4ोगिक िवK िनगम
 - 3. िवK मं7ालय
 - 4. स"ट. ल ब*क ऑफ इंडिया

Question ID : 26433047092
Status : Answered
Chosen Option : 1

Q.4 Which of the following elements has the largest atomic radii?

- Ans
- 1. Beryllium
 - 2. Lithium
 - 3. Nitrogen
 - 4. Carbon

Question ID : 26433047573
Status : Answered
Chosen Option : 2

Q.5 Who won a gold medal for India in the javelin throw event at Tokyo Olympics 2020?

- Ans
- 1. Sumit Antil
 - 2. Shivpal Singh
 - 3. Neeraj Chopra
 - 4. Ajeet Singh Yadav

Question ID : 26433047069
Status : Answered
Chosen Option : 3

Q.6 In which type of Megalith (grave/memorial) were the stone pieces set in a circular shape around the grave?

- Ans 1. Cairn circle
 2. Dolmen
 3. Rock cut cave
 4. Menhir

Question ID : 26433047081
Status : Answered
Chosen Option : 1

Q.7 Who among the following was Akbar's revenue minister?

- Ans 1. Tansen
 2. Todar Mal
 3. Raja Man Singh
 4. Birbal

Question ID : 26433047482
Status : Answered
Chosen Option : 2

Q.8 The feature of Fundamental Rights in the Indian Constitution is borrowed from the Constitution of_____.

- Ans 1. Australia
 2. Britain
 3. Ireland
 4. United States of America

Question ID : 26433047488
Status : Answered
Chosen Option : 4

Q.9 Sundari trees are found in the_____.

- Ans 1. Mahanadi delta
 2. Ganga-Brahmaputra delta
 3. Godavari delta
 4. Muthupet delta

Question ID : 26433047729
Status : Answered
Chosen Option : 2

Q.10 In which state of India is the Natyanjali festival celebrated?

- Ans 1. Goa
 2. Tamil Nadu
 3. Uttar Pradesh
 4. Rajasthan

Question ID : 26433047571
Status : Answered
Chosen Option : 2

Q.11 The number of females per 1000 males in the population is called the_____.

- Ans 1. birth rate
 2. sex ratio
 3. death rate
 4. literacy rate

Question ID : 26433047477
Status : Answered
Chosen Option : 2

Q.12 Who is the author of the book 'Gone Girl'?

- Ans 1. Damon Galgut
 2. Gillian Flynn
 3. Yann Martel
 4. Anna Burns

Question ID : 26433047085
Status : Answered
Chosen Option : 4

Q.13_____includes all non-living components, such as air, cloud, dust, land, mountains, rivers, temperature, humidity, water, water vapour, sand, etc.

- Ans 1. Biotic environment
 2. Abiotic environment
 3. Artificial environment
 4. Healthy environment

Question ID : 26433047050
Status : Answered
Chosen Option : 1

Q.14 Name the album for which Pandit Ravi Shankar won the Grammy award in 1967.

- Ans 1. Three Ragas
 2. West Meets East
 3. Concert for Bangladesh
 4. Full circle

Question ID : 26433047086
Status : Answered
Chosen Option : 1

Q.15 The state legislative assembly has a strength of____, with exceptions for smaller states.

- Ans
- 1. 600 to 1000
 - 2. 60 to 500
 - 3. 50 to 400
 - 4. 10 to 100

Question ID : 26433047064
Status : Answered
Chosen Option : 3

Q.16 Who among the following freedom fighters of India revived the Indian National Army 'Azad Hind Fauj' (which was formed in 1942 by Rash Behari Bose and Captain-General Mohan Singh) in the year 1943?

- Ans
- 1. Mahatma Gandhi
 - 2. Jawaharlal Nehru
 - 3. Bhagat Singh
 - 4. Subhas Chandra Bose

Question ID : 26433047209
Status : Answered
Chosen Option : 4

Q.17 Sattriya is a classical dance form of which Indian state?

- Ans
- 1. Manipur
 - 2. Karnataka
 - 3. Assam
 - 4. Kerala

Question ID : 26433047195
Status : Answered
Chosen Option : 1

Q.18 Which countries hosted the matches played in the 2021 ICC Men's T20 World Cup?

- Ans
- 1. Egypt and Ethiopia
 - 2. India and Bangladesh
 - 3. United Arab Emirates and Oman
 - 4. Bangladesh and Sri Lanka

Question ID : 26433047115
Status : Answered
Chosen Option : 3

Q.19 Which of the following rivers of India drains into the Bay of Bengal?

- Ans 1. Tapi
 2. Godavari
 3. Narmada
 4. Mahi

Question ID : 26433047053
Status : Answered
Chosen Option : 2

Q.20 Who among the following Indian dancers was the first woman in Indian history to be nominated as a member of the Rajya Sabha?

- Ans 1. Rukmini Devi Arundale
 2. Madhuri Dixit
 3. Mallika Sarabhai
 4. Saroj Khan

Question ID : 26433047062
Status : Answered
Chosen Option : 1

Q.21 The Jagananna Smart Township scheme was launched by which state government of India?

- Ans 1. Madhya Pradesh
 2. Punjab
 3. Odisha
 4. Andhra Pradesh

Question ID : 26433047468
Status : Answered
Chosen Option : 3

Q.22 As of April 2022, what is the capital of India's neighbouring country Bhutan?

- Ans 1. Thimphu
 2. Dhaka
 3. Beijing
 4. Paro

Question ID : 26433046905
Status : Answered
Chosen Option : 1

Q.23 Which of the following glands/organs in human body secretes bile juice?

- Ans
- 1. Pancreas
 - 2. Liver
 - 3. Pituitary
 - 4. Pineal

Question ID : 26433047200
Status : Answered
Chosen Option : 2

Q.24 Bonalu is a Hindu festival celebrated to worship Goddess Mahakali in which of the following states?

- Ans
- 1. Telangana
 - 2. Assam
 - 3. Kerala
 - 4. Madhya Pradesh

Question ID : 26433047472
Status : Answered
Chosen Option : 2

Q.25 The steep rocky coast rising almost vertically above sea water is called_____.

- Ans
- 1. sea caves
 - 2. sea cliff
 - 3. sea arches
 - 4. ox-bow lake

Question ID : 26433047476
Status : Answered
Chosen Option : 2

Multi Tasking Non Technical Staff Havaldar CBIC and CBN Examination 2021

Roll Number	
Candidate Name	
Venue Name	
Exam Date	06/07/2022
Exam Time	1:00 PM - 2:30 PM
Subject	MTS Non technical and Havaldar Examination 2021

Section : **General English**

Q.1 Select the option that will improve the underlined part of the given sentence. In case no improvement is needed, select 'No improvement required'.

Please consult a doctor before you take any medicine.

- Ans
- 1. consulting
 - 2. consulted
 - 3. No improvement required
 - 4. consults

Question ID : 26433051370

Status : **Answered**

Chosen Option : 4

Q.2 The following sentence has been divided into parts. One of them may contain an error. Select the part that contains the error from the given options. If you don't find any error, mark 'No error' as your answer.

People sometimes asks me / why carbon dioxide / is important for the climate.

- Ans
- 1. is important for the climate
 - 2. why carbon dioxide
 - 3. No error
 - 4. People sometimes asks me

Question ID : 26433050577

Status : **Answered**

Chosen Option : 4

Q.3 Select the option that will improve the underlined part of the given sentence. In case no improvement is needed, select 'No improvement required'.

The snowstorm in that region will effect thousand of travellers.

- Ans
- 1. would affecting thousand
 - 2. will effect thousands
 - 3. No improvement required
 - 4. will affect thousands

Question ID : 26433050693

Status : **Answered**

Chosen Option : 4

Q.4 Select the most appropriate ANTONYM of the given word.

HARMONY

- Ans 1. Peace
 2. Discord
 3. Tranquility
 4. Good will

Question ID : 26433051488
Status : Answered
Chosen Option : 3

Q.5 Select the most appropriate ANTONYM of the given word.

Sagacious

- Ans 1. Dull
 2. Profound
 3. keen
 4. Intelligent

Question ID : 26433051791
Status : Answered
Chosen Option : 1

Q.6 Select the most appropriate ANTONYM of the underlined word in the given sentence.

We had hundreds of courageous scientists.

- Ans 1. diffident
 2. gutsy
 3. audacious
 4. valiant

Question ID : 26433050539
Status : Not Answered
Chosen Option : --

Q.7 Select the most appropriate option to fill in the blank.

Thus, _____ of their purpose, the three knights tried another plan.

- Ans 1. involved
 2. foiled
 3. toiled
 4. failed

Question ID : 26433051155
Status : Not Answered
Chosen Option : --

Q.8 Select the most appropriate synonym of the given word.

Segregate

- Ans 1. Submerge
 2. Isolate
 3. Nullify
 4. Integrate

Question ID : 26433051330
Status : Answered
Chosen Option : 4

Q.9 Select the most appropriate option to substitute the underlined segment in the given sentence. If there is no need to substitute it, select 'No substitution required.'

Abraham also had one sister, of who not much has been recorded.

- Ans 1. of what
 2. of whose
 3. of whom
 4. No substitution required

Question ID : 26433051239
Status : Answered
Chosen Option : 3

Q.10 Select the most appropriate synonym of the given word.

Obtrusive

- Ans 1. Pervasive
 2. Exclusive
 3. Prominent
 4. Modest

Question ID : 26433051147
Status : Answered
Chosen Option : 3

Q.11 The following sentence has been divided into parts. One of them may contain an error. Select the part that contains the error from the given options. If you don't find any error, mark 'No error' as your answer.

A man tends to one / of the horses after it's / training at a stud farm.

- Ans 1. of the horses after it's
 2. A man tends to one
 3. No error
 4. training at a stud farm

Question ID : 26433051313
Status : Answered
Chosen Option : 1

Q.12 Select the most appropriate meaning of the given idiom.

Change of heart

- Ans
- 1. To narrowly escape disaster
 - 2. An unfair attack
 - 3. Different opinion about someone or something
 - 4. Very similar in appearance

Question ID : 26433051097
Status : Not Answered
Chosen Option : --

Q.13 Select the option that corrects the incorrectly spelt words in the given sentence.

Fifty people have been taken into polise custody.

- Ans
- 1. Fivety people have been taken into polise custody.
 - 2. Fiffy people have been taken into polis custody.
 - 3. Fify people have been taken into police custody.
 - 4. Fifty people have been taken into police custody.

Question ID : 26433050599
Status : Answered
Chosen Option : 4

Q.14 Select the INCORRECTLY spelt word.

- Ans
- 1. Swimming
 - 2. Borowing
 - 3. Sovereign
 - 4. Preserve

Question ID : 26433051491
Status : Answered
Chosen Option : 2

Q.15 Select the option that can be used as a one-word substitute for the given group of words.

One who hates mankind

- Ans
- 1. Altruist
 - 2. Compere
 - 3. Malevolent
 - 4. Misanthrope

Question ID : 26433050839
Status : Answered
Chosen Option : 4

Q.16 Select the most appropriate option to fill in the blank.

In all cases, we have to _____ the facts from the various reports and documents.

- Ans
- 1. Instil
 - 2. Repel
 - 3. Standstill
 - 4. Distil

Question ID : 26433051701
Status : Not Answered
Chosen Option : --

Q.17 Select the option that can be used as a one-word substitute for the given group of words.

Someone who attacks cherished ideas or traditional institutions

- Ans
- 1. Believer
 - 2. Iconoclast
 - 3. Humanitarian
 - 4. Misanthrope

Question ID : 26433051431
Status : Answered
Chosen Option : 2

Q.18 Select the option that can be used as a one-word substitute for the given group of words.

One who collects stamps

- Ans
- 1. Numismatist
 - 2. Narcissist
 - 3. Philatelist
 - 4. Collector

Question ID : 26433050726
Status : Answered
Chosen Option : 3

Q.19 The following sentence has been split into four segments. Identify the segment that contains a grammatical error.

Concern above rising pollution / led to the / formulation of / various action plans.

- Ans
- 1. Concern above rising pollution
 - 2. formulation of
 - 3. led to the
 - 4. various action plans

Question ID : 26433051722
Status : Answered
Chosen Option : 1

Q.20 Select the most appropriate meaning of the given idiom.

An eye wash

- Ans 1. In writing
 2. A pretence
 3. Avoid talking
 4. A rare event

Question ID : 26433051611

Status : Not Answered

Chosen Option : --

Comprehension:

In the following passage, some words have been deleted. Read the passage carefully and select the most appropriate option to fill in each blank.

Mt. Mantap in North Korea has now been reported to have (1)_____ from its original state after an underground nuclear test was carried out under it at the Punggye-ri nuclear test site on 3 September 2017. An international team of scientists (2)_____ a special satellite radar imaging called synthetic aperture radar and seismic recordings to study the effects of the blast which (3)_____ a 5.2 magnitude earthquake. The surface of the mountain was pushed (4) _____ by almost 11 feet and then collapsed leaving the mountain about 20 inches (5) _____.

SubQuestion No : 21

Q.21 Select the most appropriate option to fill in blank number 1.

- Ans 1. relapsed
 2. clasped
 3. mapped
 4. collapsed

Question ID : 26433051140

Status : Answered

Chosen Option : 4

Comprehension:

In the following passage, some words have been deleted. Read the passage carefully and select the most appropriate option to fill in each blank.

Mt. Mantap in North Korea has now been reported to have (1)_____ from its original state after an underground nuclear test was carried out under it at the Punggye-ri nuclear test site on 3 September 2017. An international team of scientists (2)_____ a special satellite radar imaging called synthetic aperture radar and seismic recordings to study the effects of the blast which (3)_____ a 5.2 magnitude earthquake. The surface of the mountain was pushed (4) _____ by almost 11 feet and then collapsed leaving the mountain about 20 inches (5) _____.

SubQuestion No : 22

Q.22 Select the most appropriate option to fill in blank number 2.

- Ans 1. framed
 2. used
 3. urged
 4. deduced

Question ID : 26433051141

Status : Answered

Chosen Option : 2

Comprehension:

In the following passage, some words have been deleted. Read the passage carefully and select the most appropriate option to fill in each blank.

Mt. Mantap in North Korea has now been reported to have (1)_____ from its original state after an underground nuclear test was carried out under it at the Punggye-ri nuclear test site on 3 September 2017. An international team of scientists (2)_____ a special satellite radar imaging called synthetic aperture radar and seismic recordings to study the effects of the blast which (3)_____ a 5.2 magnitude earthquake. The surface of the mountain was pushed (4)_____ by almost 11 feet and then collapsed leaving the mountain about 20 inches (5)_____.

SubQuestion No : 23**Q.23 Select the most appropriate option to fill in blank number 3.**

- Ans 1. altered
 2. neglected
 3. caused
 4. lost

Question ID : 26433051142

Status : Answered

Chosen Option : 3

Comprehension:

In the following passage, some words have been deleted. Read the passage carefully and select the most appropriate option to fill in each blank.

Mt. Mantap in North Korea has now been reported to have (1)_____ from its original state after an underground nuclear test was carried out under it at the Punggye-ri nuclear test site on 3 September 2017. An international team of scientists (2)_____ a special satellite radar imaging called synthetic aperture radar and seismic recordings to study the effects of the blast which (3)_____ a 5.2 magnitude earthquake. The surface of the mountain was pushed (4)_____ by almost 11 feet and then collapsed leaving the mountain about 20 inches (5)_____.

SubQuestion No : 24**Q.24 Select the most appropriate option to fill in blank number 4.**

- Ans 1. wayward
 2. confined
 3. aligned
 4. outwards

Question ID : 26433051143

Status : Answered

Chosen Option : 4

Comprehension:

In the following passage, some words have been deleted. Read the passage carefully and select the most appropriate option to fill in each blank.

Mt. Mantap in North Korea has now been reported to have (1)_____ from its original state after an underground nuclear test was carried out under it at the Punggye-ri nuclear test site on 3 September 2017. An international team of scientists (2)_____ a special satellite radar imaging called synthetic aperture radar and seismic recordings to study the effects of the blast which (3)_____ a 5.2 magnitude earthquake. The surface of the mountain was pushed (4)_____ by almost 11 feet and then collapsed leaving the mountain about 20 inches (5)_____.

SubQuestion No : 25

Q.25 Select the most appropriate option to fill in blank number 5.

- Ans 1. different
 2. shorter
 3. proper
 4. greater

Question ID : 26433051144
Status : Answered
Chosen Option : 2

Section : General Intelligence and Reasoning

Q.1 J, K, L, M and N are sitting on a bench. J is the immediate neighbour of K, M is the immediate neighbour of N, and J is not sitting with L who sits on the right end of the bench. J sits to the right of M and N. M sits to the right of N. In which position is J sitting?

- Ans 1. Third from the left
 2. Fourth from the left
 3. Second from the left
 4. Second from the right

Question ID : 26433047976
Status : Answered
Chosen Option : 1


Q.2 Select the number from among the given options that can replace the question mark (?) in the following series.

48, 52, 60, 72, 88, ?

- Ans 1. 118
 2. 98
 3. 112
 4. 108

Question ID : 26433047982
Status : Answered
Chosen Option : 4

Q.3 Select the correct mirror image of the given figure when the mirror is placed at the right side.



Ans

X 1.



X 2.



✓ 3.



X 4.

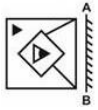


Question ID : 26433049011

Status : Answered

Chosen Option : 3

Q.4 Select the correct mirror image of the given figure when the mirror is placed at the line AB as shown.



Ans

1.




2.



3.



4.



Question ID : 26433048711

Status : Answered

Chosen Option : 4

Q.5 Eight girls, G1, G2, G3, G4, G5, G6, G7 and G8, are sitting around a circular table facing the centre (not necessarily in the same order). G5 is third to the right of G1. G8 is second to the right of G4. G4 is not the immediate neighbour of G1 or G5. G6 and G2 are immediate neighbours. G2 is not the immediate neighbour of G1. G7 is not the immediate neighbour of G8.

Which of the following statements is correct?

I. G7 is the immediate left of G4.

II. G1 and G3 are neighbour of G8.

Ans 1. Only I is correct.

2. Neither I nor II is correct.

3. Only II is correct.

4. Both I and II are correct.

Question ID : 26433049056

Status : Answered

Chosen Option : 4

Q.6 In a certain code language, '7 8 3' means 'Naira likes ice-creams', '1 3 5' means 'ice-creams are tasty', '2 5 4' means 'we are friends', then what is the code for 'tasty' in the same code language?

Ans 1. 1

2. 3

3. 2

4. 5

Question ID : 26433048348

Status : Answered

Chosen Option : 1

Q.7 Select the option that is related to the sixth number in the same way as the first number is related to the second number and third number is related to fourth number.
 $8432 : 4382 :: 2496 : 4926 :: ? : 2174$

- Ans 1. 7412
 2. 7421
 3. 7214
 4. 7142

Question ID : 26433048841
 Status : Answered
 Chosen Option : 3

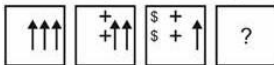
Q.8 After interchanging the given two signs and two numbers (not digits), what will be the value of the given equation?

÷ and +, 12 and 14
 $12 \div 45 + 15 \times 14 - 10 = ?$

- Ans 1. 40
 2. 20
 3. 60
 4. 80

Question ID : 26433049039
 Status : Answered
 Chosen Option : 1

Q.9 Select the figure from the given options that can replace the question mark (?) in the following series.



- Ans
1.

x	\$	+
*	\$	+
 2.

\$	+	*
\$	+	*
 3.

x	\$	+
x	\$	+
 4.

+	\$	*
+	\$	*

Question ID : 26433048858
 Status : Answered
 Chosen Option : 2

Q.10 Select the option in which the numbers are related in the same way as are the numbers in the following sets.

(3, 5, 7)
(11, 13, 17)

(NOTE : Operations should be performed on the whole numbers, without breaking down the numbers into its constituent digits. E.g. 13 – Operations on 13 such as adding /deleting /multiplying etc. to 13 can be performed. Breaking down 13 into 1 and 3 and then performing mathematical operations on 1 and 3 is not allowed)

- Ans 1. (7, 11, 17)
 2. (5, 7, 19)
 3. (7, 11, 21)
 4. (13, 17, 19)

Question ID : 26433048517
Status : Answered
Chosen Option : 4

Q.11 In a certain code language, 'TANK' is coded as '4' and 'PIR' is coded as '3'. How will 'FREIGHT' be coded in that language?

- Ans 1. 7
 2. 9
 3. 6
 4. 5

Question ID : 26433048821
Status : Answered
Chosen Option : 1

Q.12 Read the given statements and conclusions carefully. Assuming that the information given in the statements is true, even if it appears to be at variance with commonly known facts, decide which of the given conclusions logically follow(s) from the statements.

Statements:
I. All W are A.
II. Some X are W.

Conclusions:

I. All X are A.
II. Some W are X.
III. Some A are not X.

- Ans 1. Only conclusion III follows
 2. Only conclusion II follows
 3. All conclusions follow
 4. Only conclusion I follows

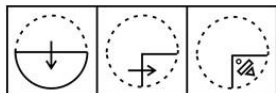
Question ID : 26433048854
Status : Answered
Chosen Option : 2

Q.13 R 4 is related to P 2 in a certain way. In the same way, F 7 is related to D 5. To which of the following is Z 8 related following the same logic?

- Ans 1. X 6
 2. Y 6
 3. X 7
 4. Y 7

Question ID : 26433048269
 Status : Answered
 Chosen Option : 1

Q.14 The sequence of folding a piece of paper and the manner in which the folded paper has been cut is shown in the following figures. How would this paper look when unfolded?



Ans

- 1.
- 2.
3.
- 4.

Question ID : 26433047916
 Status : Answered
 Chosen Option : 3

Q.15 The volume of 7 spheres V1, V2, V3, V4, V5, V6 and V7 are compared. The volume of V4 is less than V1, V2 and V5. The volume of V7 is greater than only two spheres. The volume of V4 is more than V7. If the volume of V6 is not the lowest, then the volume of how many spheres is less than V3?

- Ans 1. 0
 2. 5
 3. 1
 4. 6

Question ID : 26433049057
Status : Answered
Chosen Option : 1

Q.16 Select the option that is related to the third letter-cluster in the same way as the second letter-cluster is related to the first letter-cluster.

PAT : SVA :: CRA : ?

- Ans 1. FMI
 2. FMH
 3. EMH
 4. FNH

Question ID : 26433048851
Status : Answered
Chosen Option : 2

Q.17 Read the given statements and conclusions carefully. Assuming that the information given in the statements is true, even if it appears to be at variance with commonly known facts, decide which of the given conclusions logically follow(s) from the statements.

Statements:

- I. All P are Q.
II. All N are P.

Conclusions:

- I. All N are Q.
II. Some P are N.

- Ans 1. Both conclusions I and II follow
 2. Only conclusion II follows
 3. Neither conclusion I nor II follows
 4. Only conclusion I follows

Question ID : 26433048528
Status : Answered
Chosen Option : 1

Q.18 By interchanging the given two signs + and – and two numbers 17 and 216 (NOT digits), which of the following equations will be correct?

I. $10 \times 216 + 17 \div 6 - 13 = 146$

II. $7 \times 216 + 41 - 17 \div 36 = 81$

- Ans
- 1. Only I
 - 2. Only II
 - 3. Neither I nor II
 - 4. Both I and II

Question ID : 26433048690
Status : Answered
Chosen Option : 3

Q.19 In a certain code language, 'CEKF' is written as 'ZBHC' and 'NCPF' is written as 'KZMC'. How will 'JROG' be written in that language?

- Ans
- 1. GOMD
 - 2. GOLE
 - 3. GOLD
 - 4. GPLD

Question ID : 26433048272
Status : Answered
Chosen Option : 3

Q.20 Select the option in which the pair of letter-clusters share the same relationship as that shared by the given letter-clusters.

RSPQ : QPSR

- Ans
- 1. CRAX : XARC
 - 2. BEJK : KJBE
 - 3. MAND : NDAM
 - 4. TOUR : RUTO

Question ID : 26433048825
Status : Answered
Chosen Option : 1

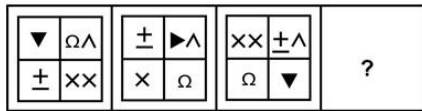
Q.21 Select the letter-cluster from among the given options that can replace the question mark (?) in the following series.

KRO, PWT, UBY, ?

- Ans
- 1. ZGE
 - 2. ZMD
 - 3. ZGD
 - 4. ZFD

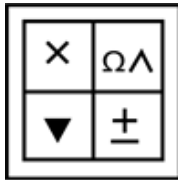
Question ID : 26433048702
Status : Answered
Chosen Option : 3

Q.22 Select the figure from among the given options that can replace the question mark (?) in the following series.

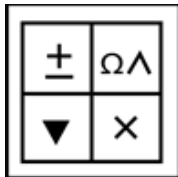


Ans

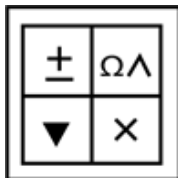
✗ 1.



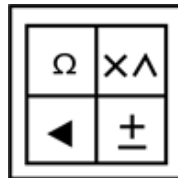
✗ 2.



✗ 3.



✓ 4.



Question ID : 26433047988

Status : Answered


Chosen Option : 4

Q.23 Select the option in which the given figure is embedded (rotation is allowed).



Ans

✓ 1.



✗ 2.



3.



4.



Question ID : 26433048535

Status : Answered

Chosen Option : 1

Q.24 Select the number from among the given options that can replace the question mark (?) in the following series.

21, 42, 168, 1008, ?

Ans 1. 8304

2. 8064

3. 7864

4. 8834

Question ID : 26433049044

Status : Answered

Chosen Option : 2

Q.25 In a certain code language, 'ABCD' is coded as '2345', and 'PALE' is coded as '172136'.
How will 'TOP' be coded in that language?

Ans 1. 201607

2. 211617

✗ 3. 201617

✗ 4. 201516

Question ID : 26433048572

Status : Answered

Chosen Option : 2

Q.1 In what time does a sum of money amount to twice of itself at simple interest of 10% per annum?

- Ans 1. 10 years
 2. 5 years
 3. 15 years
 4. 12.5 years

Question ID : 26433050032
Status : Answered
Chosen Option : 1

Q.2

- Ans 1.
 2.
 3.
 4.

Question ID : 26433049271
Status : Answered
Chosen Option : 4

Q.3 Select the number that will come in place of the question mark (?) in the following mathematical statement.

$$\frac{18}{292} \times \frac{73}{144} \times ? = 19$$

- Ans 1.
 2.
 3.
 4.

Question ID : 26433050168
Status : Answered
Chosen Option : 2

Q.4 A cylindrical rod of iron, whose height is equal to the radius of its base, is melted and cast into spherical balls, each of whose radius is half the radius of the base of the rod. Find the number of spherical balls thus made.

- Ans 1.
 2.
 3. 5
 4. 3

Question ID : 26433050190
Status : Answered
Chosen Option : 2

Q.5 What is the value of $(1 \div 8)$ of $512 - \{-5 \div 0.5\} \times 6$?

- Ans
- 1. 114
 - 2. 4
 - 3. 124
 - 4. 64

Question ID : 26433049318
Status : Answered
Chosen Option : 3

Q.6 If $P = 2^8 \times 3^5$, $Q = 2^3 \times 3^4$, and $R = 3^5 \times 2^7$, then what is the highest common factor of P, Q and R?

- Ans
- 1. $2^3 \times 3^4$
 - 2. $2^8 \times 3^5$
 - 3. $2^2 \times 3^2$
 - 4. $2^4 \times 3^5$

Question ID : 26433049862
Status : Answered
Chosen Option : 1

Q.7 An article is sold at a discount of 12.5%, and still there is a profit of 15%. At what approximate percentage over and above its cost price has the mark-up price of the article been fixed?

- Ans
- 1.
 - 2.
 - 3.
 - 4.

Question ID : 26433050024
Status : Answered
Chosen Option : 4

Q.8 What is the average of the first 60 natural numbers?

- Ans
- 1.
 - 2.
 - 3. 30.5
 - 4. 45.5

Question ID : 26433050421
Status : Answered
Chosen Option : 3

Q.9 Rajan sold an article to Shyam at a profit of 20%, Shyam sold it to Mohan at a loss of 10%, while Mohan sold it to Ratan at a profit of 12.5%. If Ratan purchased the article for ₹1,215, then at what price did Rajan purchase it?

- Ans
- 1. ₹2,000
 - 2. ₹950
 - 3. ₹1,000
 - 4. ₹900

Question ID : 26433050177
Status : Answered
Chosen Option : 3

Q.10 The average of the runs scored by 8 players in an innings is 55. If the runs scored by 7 of these players in that innings are 25, 35, 45, 60, 65, 60 and 80, then how many runs are scored by the 8th player in that innings?

- Ans
- 1.
 - 2.
 - 3.
 - 4.

Question ID : 26433050029
Status : Answered
Chosen Option : 4

Q.11 15% of 20% of S = 126. What is the value of S?

- Ans
- 1.
 - 2.
 - 3.
 - 4.

Question ID : 26433049800
Status : Answered
Chosen Option : 1

Q.12 What distance will be covered in 14 minutes by an auto rickshaw moving at 42 km/h?

- Ans
- 1.
 - 2.
 - 3.
 - 4. 5.8 km

Question ID : 26433049333
Status : Answered
Chosen Option : 3

Q.13 If a boat can cover 250 km downstream and 150 km upstream in 5 hours each, then how much distance will a wooden object flowing in the river cover in 6 hours?

- Ans
- 1. 54 km
 - 2. 50 km
 - 3. 40 km
 - 4. 60 km

Question ID : 26433050384
Status : Answered
Chosen Option : 4

Q.14 If $162 : x :: x : 338$, find the positive value of x.

- Ans
- 1.
 - 2.
 - 3.
 - 4.

Question ID : 26433049330
Status : Answered
Chosen Option : 3

Q.15 The following table shows the number of children from 4 different schools who like 4 different types of fruits. All the children like only one of the given fruits.

	No. of children who likes			
School	Apple	Orange	Mango	Grapes
P	120	50	160	150
Q	90	160	60	90
R	140	120	190	110
S	160	50	40	70

The total number of students who like grapes from schools P and R together is what percentage of the total number of students who like mango from school R?(Correct to two decimal places)

- Ans
- 1.
 - 2.
 - 3.
 - 4.

Question ID : 26433050387
Status : Answered
Chosen Option : 1

Q.16 A takes twice as much time as B or thrice as much time as C to complete a piece of work. Working together, the trio can complete this work in 2 days. How many days will B take to complete the work alone?

- Ans
- 1. 15
 - 2. 6
 - 3. 12
 - 4. 4

Question ID : 26433050335

Status : Answered

Chosen Option : 2

Q.17 Raman can do a piece of work in 8 days, Sanam and Aman together can do the same work in 6 days, while Raman and Aman together can do it in 4 days. How long will Sanam alone take to do the work?

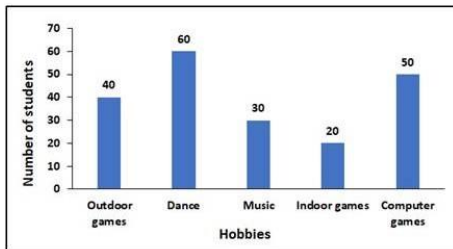
- Ans
- 1.
 - 2.
 - 3.
 - 4.

Question ID : 26433049536

Status : Answered

Chosen Option : 3

Q.18 The following bar graph shows the results of a survey conducted for 200 students about their favourite hobbies.



In percentage terms, how many more students chose outdoor games as their favourite hobby over those who chose indoor games as their favourite hobby?

- Ans
- 1.
 - 2.
 - 3.
 - 4.

Question ID : 26433049338

Status : Answered

Chosen Option : 2

Q.19 If the circumference of the top of a hemispherical bowl is 44 mm, find the radius of the top of that bowl. [Use $\pi = \frac{22}{7}$]

- Ans
- 1. 10 mm
 - 2. 7 mm
 - 3. 9 mm
 - 4. 8 mm

Question ID : 26433049291
Status : Answered
Chosen Option : 2

Q.20 Find the value of 'b' in the given mathematical statement:

$$30\% \text{ of } b\% \text{ of } 296 = 40\% \text{ of } 50\% \text{ of } 5\% \text{ of } 1480$$

- Ans
- 1. $\frac{80}{3}$
 - 2. $\frac{40}{3}$
 - 3. $\frac{125}{3}$
 - 4. $\frac{50}{3}$

Question ID : 26433050249
Status : Answered
Chosen Option : 4

Q.21 The ratio of the present ages of Smithers and Homer is 3 : 5. After 7 years, Homer's age will be 42 years. What will be Smithers' age after 8 years?

- Ans
- 1.
 - 2.
 - 3.
 - 4.

Question ID : 26433050380
Status : Answered
Chosen Option : 3

Q.22 The volume of a wall whose height is six times its breadth and length is half its height, is 23958 cm^3 . What is the breadth of the wall?

- Ans
- 1. 21 cm
 - 2. 15 cm
 - 3. 11 cm
 - 4. 18 cm

Question ID : 26433050441
Status : Answered
Chosen Option : 3

Q.23 The cost price of a wine bottle is ₹660. If the wine bottle is sold at a loss of 20%, what is the nominal amount of loss incurred through its sale?

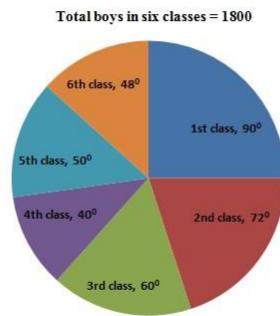
- Ans**
- 1. ₹112
 - 2. ₹110
 - 3. ₹106
 - 4. ₹132

Question ID : 26433049847

Status : Answered

Chosen Option : 4

Q.24 The pie-chart below shows, in terms of the central angles of the sectors representing each group, the distribution of number of boys in six classes of a school in a village.



If 40% of the students studying in 3rd class like to play hockey, then the number of students studying in 3rd class who do NOT like to play hockey is:

- Ans**
- 1.
 - 2.
 - 3.
 - 4.

Question ID : 26433050189

Status : Answered

Chosen Option : 1

Q.25 At simple interest a certain sum amounts to ₹12,000 in 5 years and to ₹18,000 in 8 years. What is the rate of simple interest per annum on offer?

- Ans**
- 1.
 - 2.
 - 3.
 - 4. 12.5%

Question ID : 26433049858

Status : Answered

Chosen Option : 3

Q.1 Which of the following naturally occurring acids is present in ant sting?

- Ans
- 1. Lactic acid
 - 2. Citric acid
 - 3. Methanoic acid
 - 4. Oxalic acid

Question ID : 26433047574
Status : Answered
Chosen Option : 3

Which team lost to Hyderabad FC in the finals of ISL 2021-22?

- Ans
- 1. Jamshedpur FC
 - 2. Kerala Blasters FC
 - 3. ATK Mohun Bagan
 - 4. FC Goa

Question ID : 26433047665
Status : Not Answered
Chosen Option : --

Why is there low population growth in a society that is underdeveloped and technologically backward?

- Ans
- 1. Because both death rate and birth rate are high
 - 2. Because both death rate and birth rate are low
 - 3. Because such countries usually have strict government policies related to population growth
 - 4. Because people migrate from underdeveloped countries

Question ID : 26433047829
Status : Answered
Chosen Option : 1

Q.4 Right to Education was added as a fundamental right in the Indian Constitution in _____.

- Ans
- 1. 1997
 - 2. 1986
 - 3. 2002
 - 4. 2004

Question ID : 26433047263
Status : Answered
Chosen Option : 3

Q.5 What is the coil of wire in the electric room heater known as?

- Ans
- 1. Cell
 - 2. Fuse
 - 3. Switch
 - 4. Element

Question ID : 26433047773
Status : Answered
Chosen Option : 2

Q.6 In which state of India is the Sri Brahmatureswarar temple situated?

- Ans
- 1. Andhra Pradesh
 - 2. Tamil Nadu
 - 3. Rajasthan
 - 4. Manipur

Question ID : 26433047247
Status : Not Answered
Chosen Option : --

Q.7 'Waiting for a Visa' is the autobiography of which of the following persons?

- Ans
- 1. BR Ambedkar
 - 2. Indira Gandhi
 - 3. Mahatma Gandhi
 - 4. Jawaharlal Nehru

Question ID : 26433047435
Status : Answered
Chosen Option : 2

Q.8 In which of the following sites of Indus Valley Civilisation was 'The Great Bath' found?

- Ans
- 1. Kalibangan
 - 2. Dholavira
 - 3. Lothal
 - 4. Mohenjo-Daro

Question ID : 26433047431
Status : Answered
Chosen Option : 4

Q.9 Which team won the Vijay Hazare Trophy 2021 – 22?

- Ans
- 1. Tamil Nadu
 - 2. Services
 - 3. Uttar Pradesh
 - 4. Himachal Pradesh

Question ID : 26433047215
Status : Answered
Chosen Option : 4

Q.10 Which of the following dance forms depicts the anguish of women whose partners are gone from home?

- Ans 1. Matki
 2. Biraha
 3. Alkap
 4. Paika

Question ID : 26433046720
Status : Not Answered
Chosen Option : --

Q.11 As per Census 2011, which of the following states of India has the highest sex ratio?

- Ans 1. Madhya Pradesh
 2. Uttar Pradesh
 3. Kerala
 4. Maharashtra

Question ID : 26433046679
Status : Answered
Chosen Option : 3

Q.12 The SAHAY scheme to promote sports in rebel hit areas was launched by which state of India?

- Ans 1. Jharkhand
 2. Odisha
 3. Haryana
 4. Assam

Question ID : 26433047243
Status : Not Answered
Chosen Option : --

Q.13 The oceanic crust of the earth mainly consists of_____.

- Ans 1. silica and magnesium
 2. silica and alumina
 3. magnesium and nickel
 4. iron and alumina

Question ID : 26433047251
Status : Answered
Chosen Option : 2

Q.14 In which year was the Child Marriage Restraint Act passed in India?

Ans 1. 1929

2. 1931

3. 1935

4. 1933

Question ID : 26433047583
Status : Not Answered
Chosen Option : --

Q.15 In which season are Kharif crops grown?

Ans 1. Autumn

2. Monsoon

3. Spring

4. Winter

Question ID : 26433047252
Status : Answered
Chosen Option : 2

Q.16 What is the longitudinal valley lying between lesser Himalaya and the Shiwaliks called?

Ans 1. Hana

2. Sind

3. Kangra

4. Dun

Question ID : 26433047578
Status : Answered
Chosen Option : 4

Q.17 Which of the following persons was appointed as Chief of the Air Staff of India in September 2022?

Ans 1. RKS Bhaduria

2. Harjit Singh Arora

3. Vivek Ram Chaudhari

4. Sandeep Singh

Question ID : 26433047419
Status : Answered
Chosen Option : 3

Q.18 _____ founded Satyashodhak Samaj, which campaigned against idolatry and the caste system.

- Ans
- 1. Keshab Chandra Sen
 - 2. Raja Ram Mohan Roy
 - 3. Debendranath Tagore
 - 4. Jyotirao Govindrao Phule

Question ID : 26433046734
Status : Answered
Chosen Option : 4

Q.19 Madhavi Mudgal is associated with which classical dance of India?

- Ans
- 1. Manipuri
 - 2. Kathak
 - 3. Odissi
 - 4. Sattriya

Question ID : 26433047587
Status : Answered
Chosen Option : 3

Q.20 Which of the following is the first solar project to break the grid parity barrier in India?

- Ans
- 1. Bhadla Solar Park
 - 2. Kurnool Ultra Mega Solar Park
 - 3. Rewa Ultra Mega Solar
 - 4. Charanka Solar Park

Question ID : 26433046724
Status : Not Answered
Chosen Option : --

Q.21 In which of the following states is the Goncha Festival celebrated?

- Ans
- 1. Chhattisgarh
 - 2. Karnataka
 - 3. Jharkhand
 - 4. Odisha

Question ID : 26433047771
Status : Not Answered
Chosen Option : --

Q.22 Which of the following is a component of capital budget?

- Ans
- 1. Direct spending
 - 2. Non-tax revenue
 - 3. Tax revenue
 - 4. Non-plan capital expenditure

Question ID : 26433047442
Status : Not Answered
Chosen Option : --

Q.23 How many Grammy Awards has AR Rahman won?

Ans 1. 1

2. 4

3. 2

4. 3

Question ID : 26433047436
Status : Not Answered
Chosen Option : --

Q.24 Which of the following is the correct chronological order of the rulers of the Tughluq dynasty who ruled over Delhi from the year 1320 to 1414?

Ans 1. Ghiyasuddin Tughluq, Firuz Shah Tughluq, Muhammad Tughluq

2. Firuz Shah Tughluq, Muhammad Tughluq, Ghiyasuddin Tughluq

3. Ghiyasuddin Tughluq, Muhammad Tughluq, Firuz Shah Tughluq

4. Muhammad Tughluq, Firuz Shah Tughluq, Ghiyasuddin Tughluq

Question ID : 26433047257
Status : Answered
Chosen Option : 3

Q.25 As per the Constitution of India, every Legislative Assembly of every State, unless sooner dissolved, shall continue for _____ from the date appointed for its first meeting.

Ans 1. two years

2. three years

3. six years

4. five years

Question ID : 26433047589
Status : Answered
Chosen Option : 4

Multi Tasking Non Technical Staff Havaldar CBIC and CBN Examination 2021

Roll Number	
Candidate Name	
Venue Name	
Exam Date	06/07/2022
Exam Time	5:00 PM - 6:30 PM
Subject	MTS Non technical and Havaldar Examination 2021

Section : **General English**

Q.1 Select the most appropriate option to fill in the blank.

He said the cooperative will continue to invest _____ per its usual yearly rate.

- Ans
- 1. that
 - 2. so
 - 3. such
 - 4. as

Question ID : 26433051031

Status : **Answered**

Chosen Option : 4

Q.2 Select the option that will improve the underlined part of the given sentence. In case no improvement is needed, select 'No improvement required'.

In his memoir, Attenborough said that, "Lisa would have been 11 if she was with us today."

- Ans
- 1. Attenborough said that, "Lisa will have been 11 if she were
 - 2. Attenborough said, "Lisa would have been 11 if she were
 - 3. Attenborough said, "Lisa would have been 11 if she was
 - 4. No improvement required

Question ID : 26433051568

Status : **Answered**

Chosen Option : 2

Q.3 The following sentence has been divided into parts. One of them may contain an error.

Select the part that contains the error from the given options. If you don't find any error, mark 'No error' as your answer.

Young scientists have fresh ideas; they are ambitious and highly productive.

- Ans
- 1. and highly productive
 - 2. Young scientists have fresh ideas
 - 3. No error
 - 4. they are ambitious

Question ID : 26433050742

Status : **Marked For Review**

Chosen Option : 3

Q.4 Select the option that corrects the misspelt words in the given sentence.

The anti-terrorist squod is investgating this case.

- Ans
- 1. The anti-terrorist squod is investigatng this case.
 - 2. The anti-terrorrist squad is invstigating this case.
 - 3. The anti-terroist squad is investegating this case.
 - 4. The anti-terrorist squad is investigating this case.

Question ID : 26433050764
Status : Answered
Chosen Option : 4

Q.5 Select the most appropriate option to fill in the blank.

If I _____ a doctor, I would have treated you all.

- Ans
- 1. were
 - 2. would
 - 3. am
 - 4. could

Question ID : 26433050900
Status : Answered
Chosen Option : 1

Q.6 Select the most appropriate ANTONYM of the underlined word.

He carries that sorrow with him now, just under the surface, almost tangible.

- Ans
- 1. Detectable
 - 2. Abstract
 - 3. Actual
 - 4. Distinct

Question ID : 26433051662
Status : Answered
Chosen Option : 2

Q.7 Select the option that will improve the underlined part of the given sentence. In case no improvement is needed, select 'No improvement required'.

These days, judging someone is easier then respecting them.

- Ans
- 1. is easier than
 - 2. is easiest than
 - 3. is more easier then
 - 4. No improvement required

Question ID : 26433050615
Status : Answered
Chosen Option : 1

Q.8 Select the correctly spelt word.

- Ans 1. Assembly
 2. Asembly
 3. Asemmbly
 4. Assemmbly

Question ID : 26433050841
Status : Answered
Chosen Option : 1

Q.9 Select the most appropriate meaning of the given idiom.

To lead one by the nose

- Ans 1. To try again after failing at something
 2. To control someone completely
 3. To have the freedom to choose
 4. To be anxious to start something

Question ID : 26433051281
Status : Answered
Chosen Option : 2

Q.10 Select the most appropriate ANTONYM of the given word.

Decay

- Ans 1. Disintegrate
 2. Growth
 3. Spoilage
 4. Breakdown

Question ID : 26433050833
Status : Answered
Chosen Option : 2

Q.11 Select the option that will improve the underlined part of the given sentence. In case no improvement is needed, select 'No improvement required'.

Why should we give up everything?

- Ans 1. gives up
 2. given off
 3. gave at
 4. No improvement required

Question ID : 26433050562
Status : Answered
Chosen Option : 4

Q.12 Select the most appropriate ANTONYM of the underlined word in the given sentence.

He learned to endure hunger and cold.

- Ans
- 1. Reconcile
 - 2. Persist
 - 3. Resist
 - 4. Sustain

Question ID : 26433050617
Status : Answered
Chosen Option : 3

Q.13 Select the option that will improve the underlined part of the given sentence. In case no improvement is needed, select 'No improvement required'.

My company beliefs that no one should turn up late for work.

- Ans
- 1. believing
 - 2. believes
 - 3. No improvement required
 - 4. belief

Question ID : 26433051422
Status : Answered
Chosen Option : 2

Q.14 Select the option that will improve the underlined part of the given sentence. In case no improvement is needed, select 'No improvement required'.

I am sorry of which my mother said.

- Ans
- 1. for what
 - 2. for which
 - 3. off that
 - 4. No improvement required

Question ID : 26433050882
Status : Answered
Chosen Option : 1

Q.15 Select the most appropriate meaning of the given idiom.

Play with fire

- Ans
- 1. To play a game honestly
 - 2. To do something risky
 - 3. To please someone
 - 4. To waste time on worthless things

Question ID : 26433050967
Status : Answered
Chosen Option : 2

Q.16 Select the most appropriate synonym of the given word.

Obstruct

- Ans
- 1. Replace
 - 2. Curb
 - 3. Release
 - 4. Unclog

Question ID : 26433050757
Status : Answered
Chosen Option : 2

Q.17 The following sentence has been divided into parts. One of them may contain an error. Select the part that contains the error from the given options. If you don't find any error, mark 'No error' as your answer.

Safety measures makes risky activities less risky.

- Ans
- 1. risky activities
 - 2. No error
 - 3. Safety measures makes
 - 4. less risky

Question ID : 26433050741
Status : Answered
Chosen Option : 3

Q.18 Select the most appropriate option to fill in the blank.

The ocean waves swelled and reached _____ her head, and she started screaming.

- Ans
- 1. among
 - 2. upon
 - 3. above
 - 4. at

Question ID : 26433051371
Status : Answered
Chosen Option : 3

Q.19 The following sentence has been split into four segments. Identify the segment that contains a grammatical error.

Human being are / the producers and the / consumers of Earth's / resources.

- Ans
- 1. Human being are
 - 2. resources
 - 3. the producers and the
 - 4. consumers of Earth's

Question ID : 26433051418
Status : Answered
Chosen Option : 1

Q.20 Select the most appropriate synonym of the underlined word.

I don't know why she wears these eccentric outfits.

- Ans
- 1. Expensive
 - 2. Elegant
 - 3. Bizarre
 - 4. Lavish

Question ID : 26433050914
Status : Answered
Chosen Option : 3

Comprehension:

In the following passage, some words have been deleted. Read the passage carefully and select the most appropriate option to fill in each blank.

Strong mental health is not just the (1)_____of mental health problems. (2) _____ mentally or emotionally healthy is (3)_____more than being free of depression, anxiety or other psychological issues. (4)_____than the absence of mental illness, mental health (5) _____to the presence of positive characteristics and positive outlook towards life.

SubQuestion No : 21

Q.21 Select the most appropriate option to fill in blank number 1.

- Ans
- 1. adequacy
 - 2. absence
 - 3. attendance
 - 4. leave

Question ID : 26433050903
Status : Answered
Chosen Option : 2

Comprehension:

In the following passage, some words have been deleted. Read the passage carefully and select the most appropriate option to fill in each blank.

Strong mental health is not just the (1)_____of mental health problems. (2) _____ mentally or emotionally healthy is (3)_____more than being free of depression, anxiety or other psychological issues. (4)_____than the absence of mental illness, mental health (5) _____to the presence of positive characteristics and positive outlook towards life.

SubQuestion No : 22

Q.22 Select the most appropriate option to fill in blank number 2.

- Ans
- 1. Being
 - 2. Been
 - 3. As
 - 4. Be

Question ID : 26433050904
Status : Answered
Chosen Option : 1

Comprehension:

In the following passage, some words have been deleted. Read the passage carefully and select the most appropriate option to fill in each blank.

Strong mental health is not just the (1) _____ of mental health problems. (2) _____ mentally or emotionally healthy is (3) _____ more than being free of depression, anxiety or other psychological issues. (4) _____ than the absence of mental illness, mental health (5) _____ to the presence of positive characteristics and positive outlook towards life.

SubQuestion No : 23

Q.23 Select the most appropriate option to fill in blank number 3.

Ans 1. many

2. very

3. much

4. most

Question ID : 26433050905

Status : Answered

Chosen Option : 3

Comprehension:

In the following passage, some words have been deleted. Read the passage carefully and select the most appropriate option to fill in each blank.

Strong mental health is not just the (1) _____ of mental health problems. (2) _____ mentally or emotionally healthy is (3) _____ more than being free of depression, anxiety or other psychological issues. (4) _____ than the absence of mental illness, mental health (5) _____ to the presence of positive characteristics and positive outlook towards life.

SubQuestion No : 24

Q.24 Select the most appropriate option to fill in blank number 4.

Ans 1. Sooner

2. Neither

3. Rather

4. Whether

Question ID : 26433050906

Status : Answered

Chosen Option : 3

Comprehension:

In the following passage, some words have been deleted. Read the passage carefully and select the most appropriate option to fill in each blank.

Strong mental health is not just the (1)_____of mental health problems. (2)_____ mentally or emotionally healthy is (3)_____more than being free of depression, anxiety or other psychological issues. (4)_____than the absence of mental illness, mental health (5) _____to the presence of positive characteristics and positive outlook towards life.

SubQuestion No : 25

Q.25 Select the most appropriate option to fill in blank number 5.

- Ans 1. names
 2. means
 3. resembles
 4. refers

Question ID : 26433050907
Status : Answered
Chosen Option : 4

Section : **General Intelligence and Reasoning**

Q.1 Select the option that is related to the fifth number in the same way as the second number is related to the first number and fourth number is related to third number.

(NOTE: Operations should be performed on the whole numbers, without breaking down the numbers into its constituent digits. E.g.13 – Operations on 13 such as adding /deleting /multiplying etc. to 13 can be performed. Breaking down 13 into 1 and 3 and then performing mathematical operations on 1 and 3 is not allowed)

139 : 228 :: 122 : 211 :: 2 : ?

- Ans 1. 91
 2. 198
 3. 89
 4. 189

Question ID : 26433048208
Status : Answered
Chosen Option : 1

Q.2 Which two numbers need to be interchanged to make the following equation correct?

$$42 \times 15 \div 3 + 6 - 5 = 94$$

- Ans 1. 15 and 5
 2. 15 and 6
 3. 5 and 3
 4. 6 and 3

Question ID : 26433048136
Status : Answered
Chosen Option : 2

Read the given statements and conclusions carefully. Assuming that the information given in the statements is true, even if it appears to be at variance with commonly known facts, decide which of the given conclusions logically follow(s) from the statements.

Statements:

All trousers are pants.

All pants are clothes.

Conclusions:

I. Some clothes are trousers.

II. All pants are trousers.

- Ans 1. Both conclusions I and II follow.
2. Only conclusion I follows.
3. Neither conclusion I nor II follow.
4. Only conclusion II follows.

Question ID : 26433048279

Status : Answered

Chosen Option : 2

Q.4 Select the option that is related to the fifth number in the same way as the second number is related to the first number and the fourth number is related to the third number.

24 : 36 :: 38 : 57 :: 58 : ?

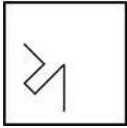
- Ans 1. 79
2. 69
3. 75
4. 87

Question ID : 26433048132

Status : Answered

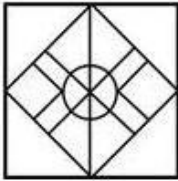
Chosen Option : 4

Q.5 Select the option in which the given figure is embedded as its part (rotation is NOT allowed).

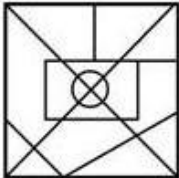


Ans

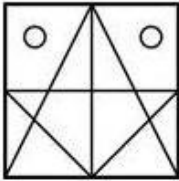
✓ 1.



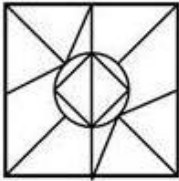
2.



3.



4.



Question ID : 26433048289

Status : Answered

Chosen Option : 1

Q.6 Read the given statements and conclusions carefully. Assuming that the information given in the statements is true, even if it appears to be at variance with commonly known facts, decide which of the given conclusions logically follow(s) from the statements.

Statements:

No shirt is a pant. Some shirts are jackets.

All jackets are trousers.

Conclusions:

I) Some shirts are trousers is a possibility.

II) No pant is a jacket.

Ans ✗ 1. Neither conclusion I nor II follows

✗ 2. Only conclusion II follows

✓ 3. Only conclusion I follows

✗ 4. Both conclusions I and II follow.

Question ID : 26433048205

Status : Answered

Chosen Option : 1

Q.7 In a certain code language, 'Trucks are heavy and good' is coded as '6 8 7 2 @', 'Weight lifts human heavy' is coded as '# % 4 8', and 'good are multiples' is coded as '@ pr 6'. What is can be the code for 'heavy good' in that language?

- Ans 1. 7 8
 2. 8 6
 3. 6 @
 4. 4 6

Question ID : 26433048647
Status : Answered
Chosen Option : 2

Q.8 Select the option that is related to the fifth word in the same way as the second word is related to the first word and the fourth word is related to the third word.

Retina : Eye :: Pons : Brain :: Cochlea : ?

- Ans 1. Heart
 2. Ear
 3. Throat
 4. Nose

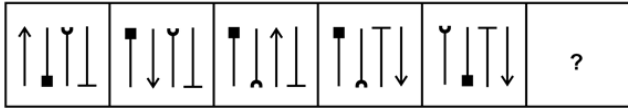
Question ID : 26433048195
Status : Answered
Chosen Option : 2

Q.9 In a certain code language, 'Numbers are even' is coded as '5 3 +', and 'Odd factors are multiples' is coded as '+ 7 6 @'. What can be the code for 'even' in that code language?

- Ans 1. 6
 2. +
 3. 5 or 3
 4. 7

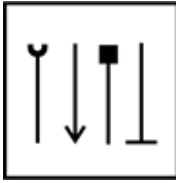
Question ID : 26433048720
Status : Answered
Chosen Option : 3

Q.10 Select the figure from among the given options that can replace the question mark (?) in the following series.



Ans

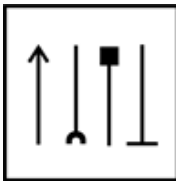
1.



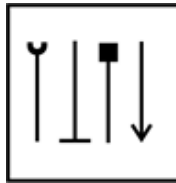
2.



3.



4.




Question ID : 26433048138

Status : Marked For Review

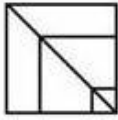
Chosen Option : 4

Q.11 Select the figure from the options that can replace the question mark (?) and complete the pattern.

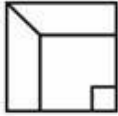


Ans

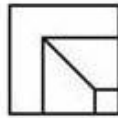
✗ 1.



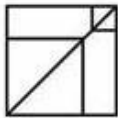
2.



3.



4.



Question ID : 26433048613

Status : Answered

Chosen Option : 3

Q.12 Select the option that is related to the fifth word in the same way as the second word is related to the first word and the fourth word is related to the third word.

Book : Author :: Movie : Director :: Poem : ?

Ans

1. Poet

2. Singer

3. Actor

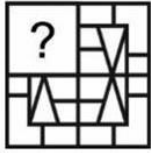
4. Dancer

Question ID : 26433047994

Status : Answered

Chosen Option : 1

Q.13 Select the figure from the given options that can replace the question mark (?) and complete the pattern.



Ans

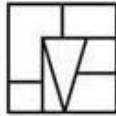
1.



2.



3.



4.



Question ID : 26433048813

Status : Answered

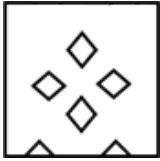
Chosen Option : 3

Q.14 The sequence of folding a piece of paper and the manner in which the folded paper has been cut is shown in the following figures. How would this paper look when unfolded?




Ans


~~1.~~




2.



3.



4.



Question ID : 26433047966

Status : Answered

Chosen Option : 2

Q.15 In a certain code language, if dress is called comb, comb is called hair dryer, hair dryer is called lipstick, lipstick is called sandal, and sandal is called jewellery, then what is used to colour the lips?

Ans

1. Jewellery

2. Comb

3. Hair dryer

4. Sandal

Question ID : 26433048024

Status : Answered

Chosen Option : 4

Q.16 The heights of seven boys B1, B2, B3, B4, B5, B6 and B7 is compared. They all have different heights. B2 is taller than B1 and B6. B7 is shorter than B3 and B4 but taller than B5. B5 is taller than only three boys and B3 is the tallest. How many boys are shorter than B4 and taller than B2?

- Ans 1. 2
 2. 1
 3. 4
 4. 3

Question ID : 26433048807
Status : Answered
Chosen Option : 1

Q.17 Seven friends, Parv, Qazi, Raees, Sushil, Tania, Uma, and Vishnu are sitting around a circular table facing the centre. Parv is immediate neighbour of both Tania and Sushil. Uma is immediate neighbour of both Qazi and Vishnu. Qazi is sitting second to the right of Tania. Who is sitting to the immediate left of Qazi?

- Ans 1. Raees
 2. Sushil
 3. Vishnu
 4. Uma

Question ID : 26433048126
Status : Answered
Chosen Option : 1

Q.18 In a certain code language, 'TRAM' is written as 'UQBL' and 'PAST' is written as 'QZTS'. How will 'DEED' be written in that language?

- Ans 1. FEDC
 2. EFCD
 3. CEFD
 4. EDFC

Question ID : 26433047997
Status : Answered
Chosen Option : 4

Q.19 What will be the value of the given expression, if 'A' means '+', 'B' means '-', 'C' means 'x' and 'D' means '÷'?

20 B 30 A 15 C 20 D 5

- Ans 1. 60
 2. 50
 3. 40
 4. 55

Question ID : 26433048789
Status : Answered
Chosen Option : 2

Q.20 Select the set in which the numbers are related in the same way as are the numbers of the following sets.

(NOTE : Operations should be performed on the whole numbers, without breaking down the numbers into its constituent digits. E.g. 13 – Operations on 13 such as adding /deleting /multiplying etc. to 13 can be performed. Breaking down 13 into 1 and 3 and then performing mathematical operations on 1 and 3 is not allowed.)

(13, 28, 86) (18, 38, 116)

Ans 1. (10, 22, 68)

2. (9, 18, 56)

3. (8, 18, 54)

4. (11, 24, 76)

Question ID : 26433048284

Status : Answered

Chosen Option : 1

Q.21 Select the option that is related to the third letter-cluster in the same way as the second letter-cluster is related to the first letter-cluster.

POLE : SROH :: HAIR : ?

Ans 1. KGLU

2. KDLU

3. KELU

4. KDLV

Question ID : 26433048724

Status : Answered

Chosen Option : 2

Q.22 Seven women A, B, C, D, E, F and G are sitting in a row facing the South (not necessarily in the same order). A is fifth to the right of G. A is at one of the ends. E is exactly in the middle of row. F is fourth to the right of G. B is not the immediate neighbour of E. D is to the immediate left of E.

Which of the following statements is/are NOT correct?

I. D is third to the left of F.

II. F is sitting between C and D.

Ans 1. Both I and II

2. Only I

3. Neither I nor II

4. Only II

Question ID : 26433048806

Status : Answered

Chosen Option : 4

Q.23 Identify the number that does NOT belong to the following series.

46, 93, 188, 379, 764, 1529

Ans 1. 764

2. 93

3. 188

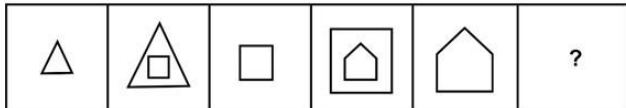
4. 379

Question ID : 26433048794

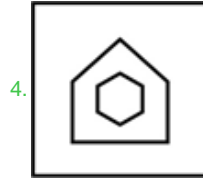
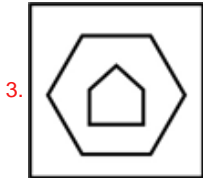
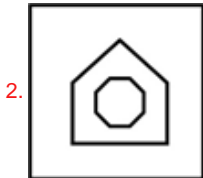
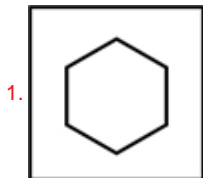
Status : Answered

Chosen Option : 1

Q.24 Select the figure from among the given options that can replace the question mark (?) in the following series.



Ans



Question ID : 26433048212

Status : Answered

Chosen Option : 4

Q.25 Select the letter from among the given options that can replace the question mark (?) in the following series.

I, M, Q, U, ?, C

- Ans 1. W
 2. A
 3. V
 4. Y

Question ID : 26433048118
Status : Answered
Chosen Option : 4

Section : Numerical Aptitude

Q.1 What approximate value should come in the place of the question mark '?' in the following equation?

$$305.03 \div 61.09 \times 11.47 = ?$$

- Ans 1.
 2. 47
 3. 12
 4. 63

Question ID : 26433049544
Status : Answered
Chosen Option : 1

Q.2 The average weight of 6 girls is increased by 2.5 kg when one of the girls whose weight is 38 kg is replaced by a new girl. Find the weight of the new girl.

- Ans 1. 58 kg
 2. 53 kg
 3. 49 kg
 4. 46 kg

Question ID : 26433049473
Status : Answered
Chosen Option : 2

Q.3 Find the area of a trapezium whose parallel sides are of length 15 cm and 20 cm, respectively, and whose distance between the parallel sides is 12 cm.

- Ans 1. 280 cm²
 2. 210 cm²
 3. 360 cm²
 4. 120 cm²

Question ID : 26433049565
Status : Answered
Chosen Option : 2

Q.4 What is the largest number that can exactly divide 403 and 496?

- Ans
- 1. 62
 - 2. 93
 - 3. 13
 - 4. 31

Question ID : 26433049637
Status : Answered
Chosen Option : 4

Q.5

- Ans
- 1.
 - 2.
 - 3.
 - 4.

Question ID : 26433049622
Status : Answered
Chosen Option : 2

Q.6 Two right circular cones of equal volumes have their heights in the ratio 4 : 9. What is the ratio of the radii of their bases, the cones coming in the same order as that in which the ratio of their heights is given?

- Ans
- 1.
 - 2.
 - 3.
 - 4.

Question ID : 26433049366
Status : Answered
Chosen Option : 1

Q.7 If 60% of $G = \frac{4}{5}$ of H, then G is approximately what percentage of H?

- Ans
- 1.
 - 2.
 - 3.
 - 4. 133.33%

Question ID : 26433049975
Status : Answered
Chosen Option : 4

Q.8 The terms $x - 1$, $x + 2$, $3x + 5$, and y are in proportion. Find the value of y if $x = 5$.

- Ans 1. 45
 2. 29
 3. 35
 4. 24

Question ID : 26433049480
Status : Answered
Chosen Option : 3

Q.9 Krish can do a piece of work in 4 days, while Rishi can do the same work in 6 days. Both of them work together and get a total of ₹1,600. What is the share of Rishi?

- Ans 1.
 2.
 3.
 4.

Question ID : 26433049435
Status : Answered
Chosen Option : 2

Q.10 The average age of 24 students in a class is 15 years. When the teacher's age is included, the average increases by 1. What is the teacher's age (in years)?

- Ans 1.
 2.
 3.
 4.

Question ID : 26433050296
Status : Answered
Chosen Option : 4

Q.11

- Ans 1.
 2.
 3.
 4.

Question ID : 26433049481
Status : Answered
Chosen Option : 2

Q.12 The value of $\{(0.51)^3 + (0.49)^3\} \div \{(0.51)^2 - 0.2499 + (0.49)^2\}$ is:

- Ans
- 1. 2.9
 - 2. 1.00
 - 3. 1.57
 - 4. 3.31

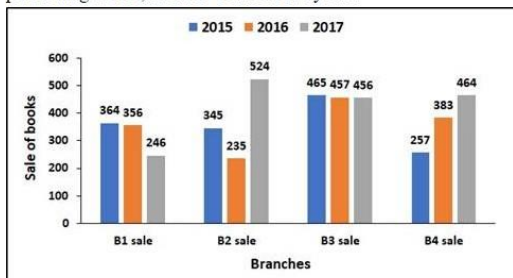
Question ID : 26433049468
Status : Answered
Chosen Option : 2

Q.13 The difference between the length and the breadth of a rectangle is 16 cm. If its perimeter is 188 cm, then what is its area?

- Ans
- 1. 2100 cm²
 - 2. 2145 cm²
 - 3. 2050 cm²
 - 4. 2375 cm²

Question ID : 26433050316
Status : Answered
Chosen Option : 2

Q.14 The following bar graph shows the number of books sold from four different branches, B1, B2, B3 and B4, of a publishing house, in three consecutive years.

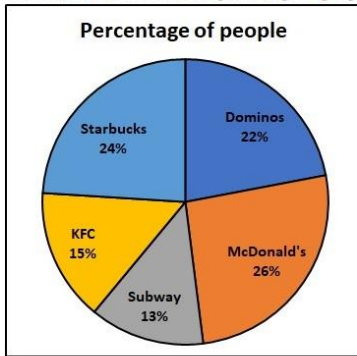


Calculate the total number of books sold from branch B3 during these three years.

- Ans
- 1.
 - 2.
 - 3.
 - 4.

Question ID : 26433049488
Status : Answered
Chosen Option : 2

Q.15 A survey was conducted among 3000 people to find the chain of cafes that was most popular. The following pie chart shows the distribution of the percentage of people according to the choice of their favourite cafe.



Find the ratio of the number of the people who selected the most popular among the given café chains as their favourite to the number of the people who selected the least popular among the given café chains as their favourite.

- Ans**
- 1.
 - 2.
 - 3.
 - 4.

Question ID : 26433049564
Status : **Answered**
Chosen Option : 1

Q.16 The average of U, V and W is 48 and that of V and W is 48. What is the value of U?

- Ans**
- 1.
 - 2.
 - 3.
 - 4.

Question ID : 26433049346
Status : **Answered**
Chosen Option : 2

Q.17 A car travels the first half of a journey at a speed of 80 km/h and the next half of the journey at 100 km/h. What is the average speed of the car? [Give your answer correct to 2 places of decimal.]

- Ans**
- 1.
 - 2.
 - 3.
 - ~~4.~~ 45.41 km/h

Question ID : 26433049483
Status : **Answered**
Chosen Option : 1

Q.18 A can do a piece of work alone in 12 days. B is 20% more efficient than A, and C is 25% more efficient than B. In how many days can B and C together complete the work?

Ans

1. $\frac{35}{7}$ days

2. $\frac{35}{9}$ days

3. $\frac{40}{7}$ days

4. $\frac{40}{9}$ days

Question ID : 26433049994

Status : Answered

Chosen Option : 4

Q.19 If $M = 8x$ and $N = 6x$, then N is what percentage less than M?

Ans

1.

2.

3.

4.

Question ID : 26433049675

Status : Answered

Chosen Option : 3

Q.20 How much amount will be received on a principal of ₹10,000 at the rate of 12% per annum, compounded annually for 2 years?

Ans

1.

2.

3.

4.

Question ID : 26433049633

Status : Answered

Chosen Option : 4

Q.21 The following table shows the total number of votes polled and the percentage of invalid votes in a polling center in a village during the last four Assembly elections.

Year	Total votes polled	Percentage of Invalid votes
2005	6500	5%
2010	8000	7%
2015	9400	15%
2020	10400	12%

What is the sum of the number of valid votes polled in 2010 and 2015 at this center?

- Ans**
- 1.
 - 2.
 - 3.
 - 4.

Question ID : 26433050137
Status : Answered
Chosen Option : 2

Q.22 The marked price of an article is kept at 25% above the cost price. If the article is sold at a discount of 8%, find the ratio of its selling price to its cost price.

- Ans**
- 1.
 - 2.
 - 3.
 - 4.

Question ID : 26433049478
Status : Answered
Chosen Option : 2

Q.23 In a housing society, the ratio of two-wheelers to four-wheelers is 11 : 9. Among the four-wheelers, one-fourth are petrol vehicles and the remaining 81 are diesel vehicles. How many two-wheelers are there in this housing society?

- Ans**
- 1.
 - 2.
 - 3.
 - 4.

Question ID : 26433050130
Status : Answered
Chosen Option : 2

Q.24 By selling an article for ₹450, Riyan incurred a loss of 10%. At what price should he sell it to make a profit of 12%?

- Ans
- 1. ₹480
 - 2. ₹440
 - 3. ₹560
 - 4. ₹600

Question ID : 26433049552
Status : Answered
Chosen Option : 3

Q.25 The speed of a boat in still water is 16 km/h. the time taken by the boat to cover a distance of 18 km upstream is equal to the time taken by the boat to travel 30Km downstream. What is the speed of the stream?

- Ans
- 1.
 - 2. 7 km/h
 - 3. 5 km/h
 - 4. 6 km/h

Question ID : 26433050134
Status : Answered
Chosen Option : 1

Section : General Awareness

Q.1 In which state of India is Nishagandhi festival celebrated?

- Ans
- 1. Kerala
 - 2. Odisha
 - 3. Madhya Pradesh
 - 4. Rajasthan

Question ID : 26433047521
Status : Answered
Chosen Option : 4

Q.2 The famous song 'Aye Mere Watan Ke Logo' was originally sung by_____.

- Ans
- 1. Shreya Ghoshal
 - 2. Arijit Singh
 - 3. Lata Mangeshkar
 - 4. Asha Bhosle

Question ID : 26433046886
Status : Answered
Chosen Option : 3

Q.3 Who among the following took the title of 'Ghazi' after defeating Rana Sanga in the Battle of Khanwa in 1527?

- Ans 1. Babur
 2. Daulat Khan Lodhi
 3. Humayun
 4. Mahmud Shah I

Question ID : 26433047032
Status : Answered
Chosen Option : 1

Q.4 Mona writes about an ocean that separates North America from Europe. Which ocean is it?

- Ans 1. Atlantic Ocean
 2. Arctic Ocean
 3. Indian Ocean
 4. Pacific Ocean

Question ID : 26433047026
Status : Answered
Chosen Option : 1

Q.5 What is the term of State Legislative Assembly in India as per Indian Constitution?

- Ans 1. 7 years
 2. 4 years
 3. 5 years
 4. 3 years

Question ID : 26433046964
Status : Answered
Chosen Option : 3

Q.6 With which Indian state is the 'Panthi' dance form associated?

- Ans 1. Maharashtra
 2. Chhattisgarh
 3. Punjab
 4. Kerala

Question ID : 26433046870
Status : Answered
Chosen Option : 3

Q.7 Which Mauryan ruler was called 'Amitrochates' by the Greeks?

- Ans
- 1. Samudragupta
 - 2. Chandragupta I
 - 3. Bindusara
 - 4. Kanishka

Question ID : 26433046881
Status : Answered
Chosen Option : 3

Q.8 Which of the following Articles under Directive Principles of State Policy, in the Indian constitution provides the organisation of village panchayats?

- Ans
- 1. Article 60
 - 2. Article 50
 - 3. Article 30
 - 4. Article 40

Question ID : 26433047038
Status : Answered
Chosen Option : 4

Q.9 According to the data from the economic think-tank, the Centre for Monitoring Indian Economy (CMIE), which of the following states witnessed the highest unemployment rate as of January 2022?

- Ans
- 1. Rajasthan
 - 2. Delhi
 - 3. Tripura
 - 4. Haryana

Question ID : 26433046754
Status : Answered
Chosen Option : 4

Q.10 Who is the recipient of the Abhinandan Saroja National Award 2021 by the National Institute of Indian Classical Dance?

- Ans
- 1. Aparna Satheesan
 - 2. Prabhudeva
 - 3. Chaya Kumar
 - 4. Shovana Narayan

Question ID : 26433046962
Status : Not Answered
Chosen Option : --

Q.11 Choose the most reactive metal from the options given below.

- Ans 1. Copper
 2. Zinc
 3. Sodium
 4. Iron

Question ID : 26433047523
Status : Answered
Chosen Option : 3

Q.12 Which of the following is an example of Mughal architecture under Aurangzeb?

- Ans 1. Moti Masjid, Delhi
 2. Taj Mahal, Agra
 3. Jama Masjid, Delhi
 4. Qutab Minar, Delhi

Question ID : 26433047022
Status : Answered
Chosen Option : 1

Q.13 Which of the following was set up in 1956 by the Indian government by nationalising all the existing private sector life insurance companies?

- Ans 1. New India Insurance Company of India Limited
 2. General Insurance Corporation
 3. Life Insurance Corporation of India
 4. United India Insurance Company Limited

Question ID : 26433046892
Status : Answered
Chosen Option : 3

Q.14 Who among the following won a bronze medal in the Summer Olympics 2020 (played in 2021)?

- Ans 1. Ravi Dahiya
 2. Neeraj Chopra
 3. PV Sindhu
 4. Mirabai Chanu

Question ID : 26433047390
Status : Answered
Chosen Option : 3

Q.15 India and Sri Lanka are joined by a group of islets forming_____.

- Ans
- 1. Mahatma Gandhi Setu
 - 2. Sisseri River Bridge
 - 3. Bhupen Hazarika Bridge
 - 4. Adam's Bridge

Question ID : 26433046953
Status : Answered
Chosen Option : 4

Q.16 Which of the following was a revolutionary organisation formed outside India in 1913?

- Ans
- 1. Bharatiya Janata Party
 - 2. Simon Commission
 - 3. Ghadar Party
 - 4. Indian National Congress

Question ID : 26433046958
Status : Answered
Chosen Option : 3

Q.17 Which animal was the official mascot of the ICC Cricket World Cup 2011?

- Ans
- 1. Elephant
 - 2. Horse
 - 3. Lion
 - 4. Tiger

Question ID : 26433047090
Status : Marked For Review
Chosen Option : 4

Q.18 Which TMC candidate won the Asansol (West Bengal) by-poll election in April 2022?

- Ans
- 1. Mamata Banerjee
 - 2. Agnimitra Paul
 - 3. Shatrughan Sinha
 - 4. Rahul Gandhi

Question ID : 26433046869
Status : Answered
Chosen Option : 2

Q.19 Which of the following ports is known as 'Diamond Harbour'?

- Ans
- 1. Port Blair
 - 2. Kochi
 - 3. Kolkata
 - 4. Mangalore

Question ID : 26433047027
Status : Answered
Chosen Option : 3

Q.20 Indian shooter and gold medallist Abhinav Bindra's autobiographical book is called

- Ans
- 1. Shots Fired
 - 2. Hunting the Hard Way
 - 3. Firing Point
 - 4. A Shot at History

Question ID : 26433046885
Status : Answered
Chosen Option : 4

Q.21 Which of the following socio religious communities was founded by Raja Ram Mohan Roy?

- Ans
- 1. Akali Dal
 - 2. Prarthana Samaj
 - 3. Arya Samaj
 - 4. Brahmo Samaj

Question ID : 26433046884
Status : Answered
Chosen Option : 4

Q.22 Which of the following is an example of Phylum Mollusca of the animal kingdom?

- Ans
- 1. Octopus
 - 2. Sea horse
 - 3. Dolphin
 - 4. King crab

Question ID : 26433046874
Status : Not Answered
Chosen Option : --

Q.23 According to the census 2011, which state is the most populous state in India?

- Ans
- 1. Uttar Pradesh
 - 2. Rajasthan
 - 3. Kerala
 - 4. Madhya Pradesh

Question ID : 26433047704
Status : Answered
Chosen Option : 1

Q.24 The Delhi Municipal Corporation (Amendment) Bill, 2022 was proposed in Lok Sabha by the Ministry of_____.

- Ans
- 1. Law and Justice
 - 2. Defence
 - 3. Social justice and Empowerment
 - 4. Home Affairs

Question ID : 26433047018
Status : Answered
Chosen Option : 4

Q.25 Which natural compound helps in photosynthesis of plants?

- Ans
- 1. Chlorophyll
 - 2. Glucose
 - 3. curcumin
 - 4. Lectin

Question ID : 26433046950
Status : Answered
Chosen Option : 1